

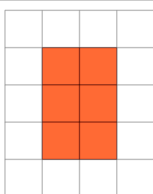


## Perimeter of a Shape on a Grid - Perimeter to Rectangle Shape

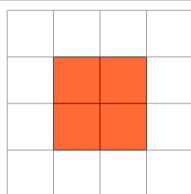
1

Find the shape that has a perimeter of 10 on the grid of 1x1 squares

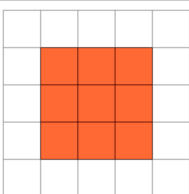
A



B



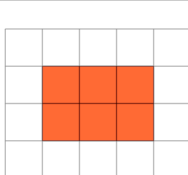
C



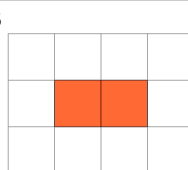
2

Find the shape that has a perimeter of 8 on the grid of 1x1 squares

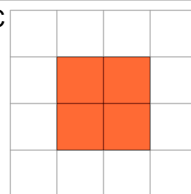
A



B



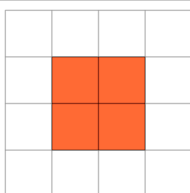
C



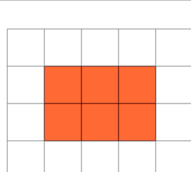
3

Find the shape that has a perimeter of 10 on the grid of 1x1 squares

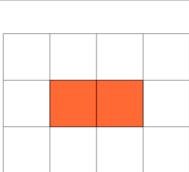
A



B



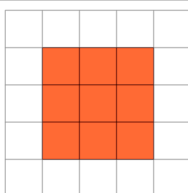
C



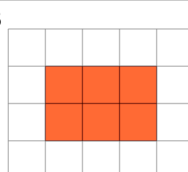
4

Find the shape that has a perimeter of 12 on the grid of 1x1 squares

A



B



C

