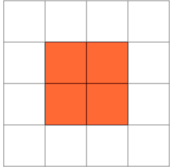


## Perimeter of a Shape on a Grid - Longest Perimeter, Rectangle Shape

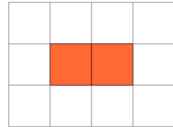
**1**

Which shape on the 1x1 grid has the longest perimeter?

A

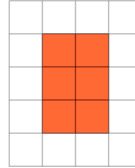


B

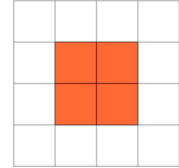
**2**

Which shape on the 1x1 grid has the longest perimeter?

A

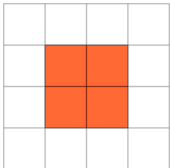


B

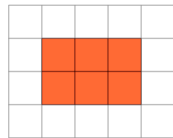
**3**

Which shape on the 1x1 grid has the longest perimeter?

A

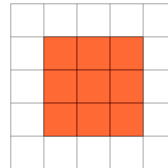


B

**4**

Which shape on the 1x1 grid has the longest perimeter?

A



B

