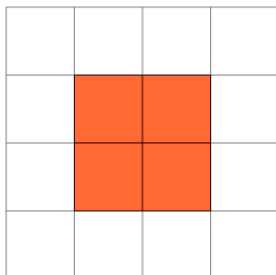


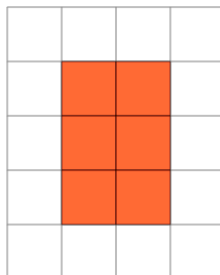


## Perimeter of a Shape on a Grid - Rectangle Shape to Perimeter

**1**

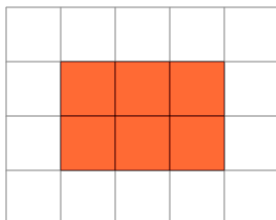
Find the perimeter of the shape  
on this grid of 1x1 squares

A	8	B	2
C	12	D	9
E	10	F	17

**2**

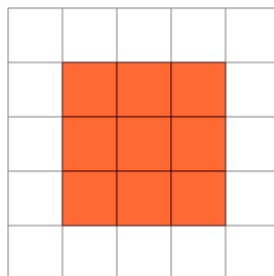
Find the perimeter of the shape  
on this grid of 1x1 squares

A	12	B	5
C	19	D	10
E	2	F	9

**3**

Find the perimeter of the shape  
on this grid of 1x1 squares

A	14	B	13
C	4	D	10
E	9	F	3

**4**

Find the perimeter of the shape  
on this grid of 1x1 squares

A	17	B	19
C	14	D	9
E	3	F	12