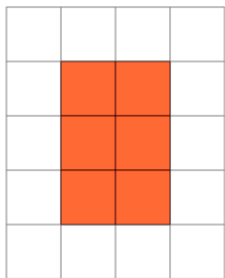


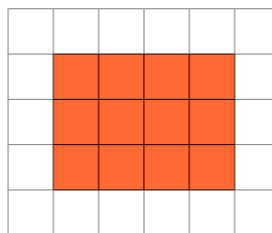


Perimeter of a Shape on a Grid - Rectangle Shape to Perimeter

1

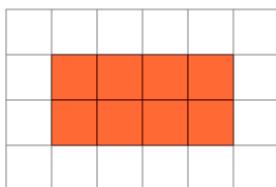
Find the perimeter of the shape
on this grid of 1x1 squares

A	1	B	7
C	18	D	10
E	6	F	13

2

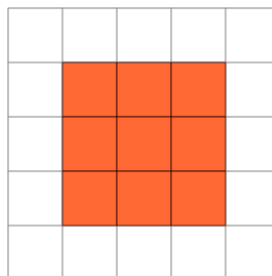
Find the perimeter of the shape
on this grid of 1x1 squares

A	20	B	14
C	11	D	6
E	13	F	9

3

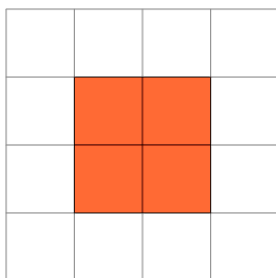
Find the perimeter of the shape
on this grid of 1x1 squares

A	11	B	4
C	19	D	16
E	5	F	12

4

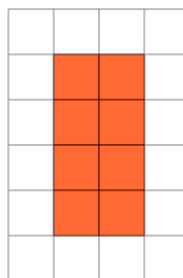
Find the perimeter of the shape
on this grid of 1x1 squares

A	7	B	15
C	11	D	12
E	2	F	18

5

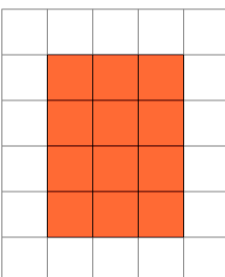
Find the perimeter of the shape
on this grid of 1x1 squares

A	14	B	8
C	17	D	9
E	7	F	5

6

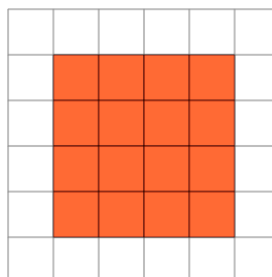
Find the perimeter of the shape
on this grid of 1x1 squares

A	10	B	7
C	18	D	2
E	4	F	12

7

Find the perimeter of the shape
on this grid of 1x1 squares

A	18	B	4
C	12	D	9
E	14	F	19

8

Find the perimeter of the shape
on this grid of 1x1 squares

A	8	B	12
C	20	D	16
E	23	F	14