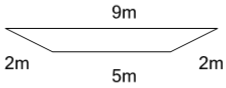




Perimeter of a Trapezoid - Concept Intro

**1**

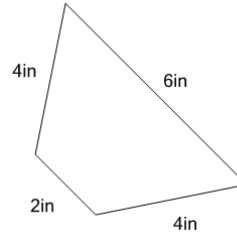
Find the perimeter (the total length of all sides) of this trapezoid



A	22m	B	9m
C	16m	D	18m
E	13m	F	14m

2

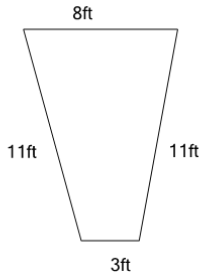
Find the perimeter (the total length of all sides) of this trapezoid



A	16in	B	21in
C	10in	D	11in
E	19in	F	22in

3

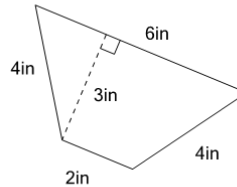
Find the perimeter (the total length of all sides) of this trapezoid



A	36ft	B	17ft
C	33ft	D	23ft
E	46ft	F	20ft

4

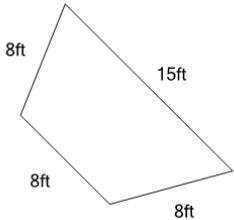
Find the perimeter (the total length of all sides) of this trapezoid



A	22in	B	14in
C	16in	D	11in
E	10in	F	18in

5

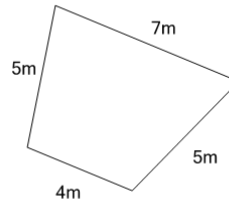
Find the perimeter (the total length of all sides) of this trapezoid



A	39ft	B	31ft
C	27ft	D	55ft
E	35ft	F	51ft

6

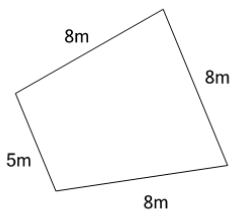
Find the perimeter (the total length of all sides) of this trapezoid



A	21m	B	11m
C	29m	D	27m
E	15m	F	23m

7

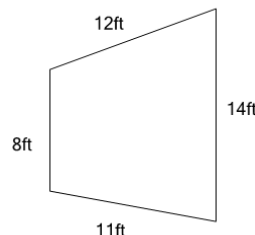
Find the perimeter (the total length of all sides) of this trapezoid



A	29m	B	26m
C	38m	D	35m
E	23m	F	17m

8

Find the perimeter (the total length of all sides) of this trapezoid



A	27ft	B	63ft
C	45ft	D	41ft
E	50ft	F	23ft