
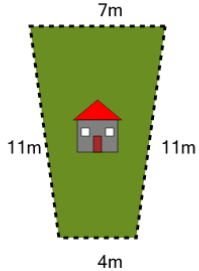


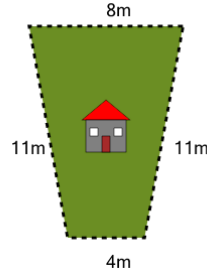


Perimeter of a Trapezoid - Picture Intro

**1**

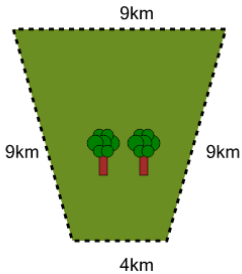
How long is the fence around this yard?

A	54m	B	33m
C	12m	D	57m
E	45m	F	48m

2

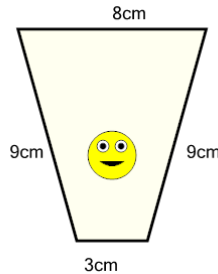
How long is the fence around this yard?

A	61m	B	37m
C	34m	D	28m
E	43m	F	19m

3

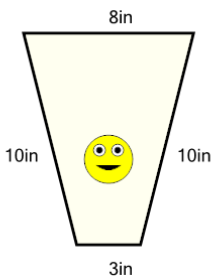
How far is it to run around the outside of this park?

A	31km	B	46km
C	58km	D	19km
E	4km	F	43km

4

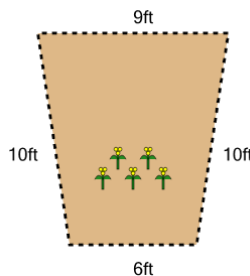
How long is the border around the outside of this painting?

A	29cm	B	37cm
C	35cm	D	9cm
E	25cm	F	15cm

5

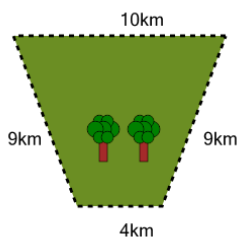
How long is the border around the outside of this painting?

A	7in	B	58in
C	34in	D	13in
E	31in	F	46in

6

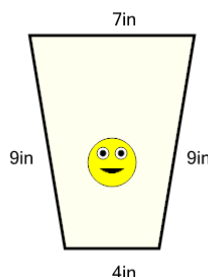
How long is the fence around this garden?

A	20ft	B	59ft
C	56ft	D	32ft
E	47ft	F	35ft

7

How far is it to run around the outside of this park?

A	38km	B	47km
C	56km	D	41km
E	32km	F	35km

8

How long is the border around the outside of this painting?

A	13in	B	37in
C	45in	D	29in
E	15in	F	25in