
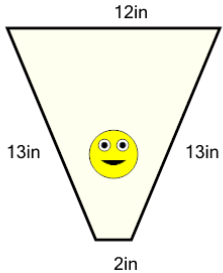


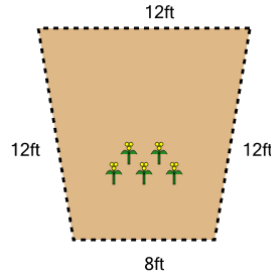


Perimeter of a Trapezoid - Picture Intro

**1**

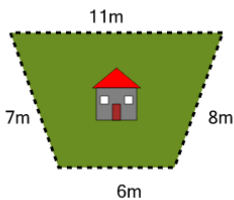
How long is the border around the outside of this painting?

A	40in	B	64in
C	24in	D	44in
E	72in	F	36in

2

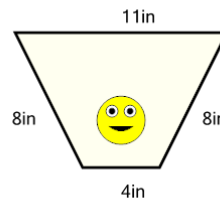
How long is the fence around this garden?

A	44ft	B	60ft
C	76ft	D	52ft
E	20ft	F	16ft

3

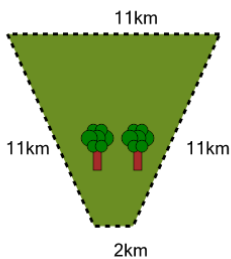
How long is the fence around this yard?

A	32m	B	23m
C	56m	D	53m
E	14m	F	26m

4

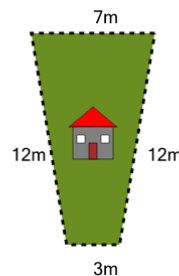
How long is the border around the outside of this painting?

A	10in	B	4in
C	31in	D	1in
E	25in	F	58in

5

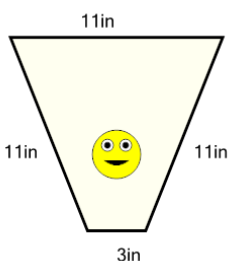
How far is it to run around the outside of this park?

A	35km	B	20km
C	23km	D	41km
E	62km	F	32km

6

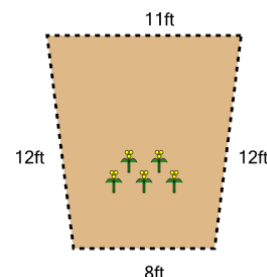
How long is the fence around this yard?

A	10m	B	49m
C	34m	D	28m
E	13m	F	25m

7

How long is the border around the outside of this painting?

A	57in	B	24in
C	63in	D	30in
E	36in	F	33in

8

How long is the fence around this garden?

A	27ft	B	19ft
C	51ft	D	47ft
E	35ft	F	43ft