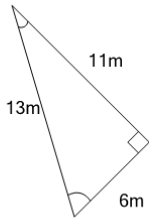
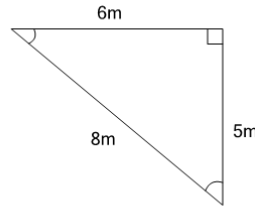


**1**

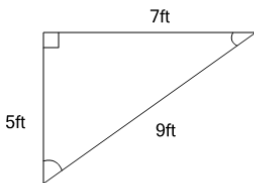
Find the perimeter of the triangle

A	24m	B	54m
C	12m	D	30m
E	48m	F	6m

**2**

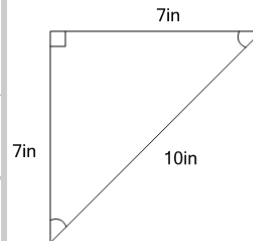
Find the perimeter of the triangle

A	27m	B	8m
C	34m	D	19m
E	15m	F	11m

**3**

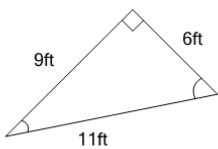
Find the perimeter of the triangle

A	38ft	B	21ft
C	29ft	D	25ft
E	13ft	F	17ft

**4**

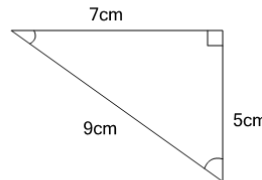
Find the perimeter of the triangle

A	10in	B	24in
C	19in	D	34in
E	43in	F	29in

**5**

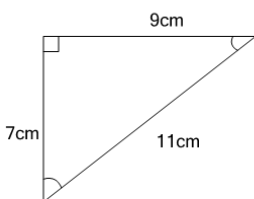
Find the perimeter of the triangle

A	31ft	B	42ft
C	10ft	D	26ft
E	21ft	F	36ft

**6**

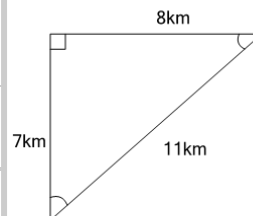
Find the perimeter of the triangle

A	21cm	B	13cm
C	34cm	D	8cm
E	4cm	F	17cm

**7**

Find the perimeter of the triangle

A	22cm	B	43cm
C	49cm	D	38cm
E	27cm	F	11cm

**8**

Find the perimeter of the triangle

A	42km	B	16km
C	26km	D	31km
E	21km	F	47km