
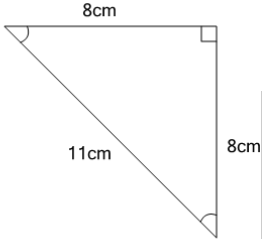


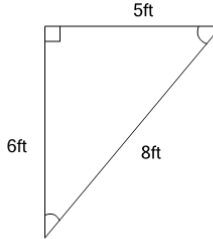


## Perimeter of a Triangle - Concept Intro

**1**

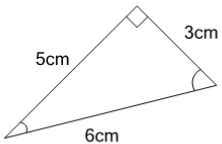
Find the perimeter (the total length of all sides) of this triangle

A	27cm	B	49cm
C	22cm	D	5cm
E	16cm	F	43cm

**2**

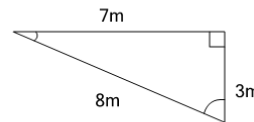
Find the perimeter (the total length of all sides) of this triangle

A	19ft	B	30ft
C	4ft	D	15ft
E	11ft	F	34ft

**3**

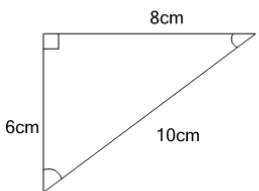
Find the perimeter (the total length of all sides) of this triangle

A	11cm	B	20cm
C	3cm	D	8cm
E	25cm	F	14cm

**4**

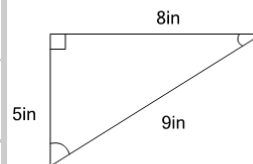
Find the perimeter (the total length of all sides) of this triangle

A	32m	B	7m
C	29m	D	18m
E	11m	F	22m

**5**

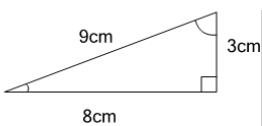
Find the perimeter (the total length of all sides) of this triangle

A	34cm	B	24cm
C	5cm	D	19cm
E	29cm	F	38cm

**6**

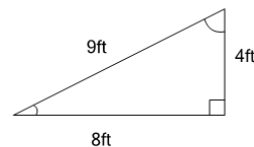
Find the perimeter (the total length of all sides) of this triangle

A	31in	B	35in
C	9in	D	22in
E	40in	F	13in

**7**

Find the perimeter (the total length of all sides) of this triangle

A	8cm	B	36cm
C	4cm	D	16cm
E	24cm	F	20cm

**8**

Find the perimeter (the total length of all sides) of this triangle

A	4ft	B	29ft
C	8ft	D	17ft
E	25ft	F	21ft