
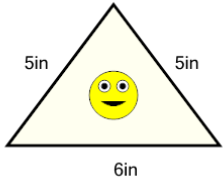




Perimeter of a Triangle - Picture Intro

**1**

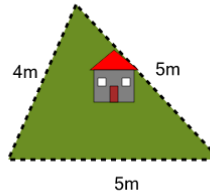
How long is the border around the outside of this painting?



A	9in	B	16in
C	14in	D	25in
E	11in	F	13in

2

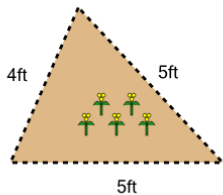
How long is the fence around this yard?



A	12m	B	17m
C	15m	D	9m
E	18m	F	14m

3

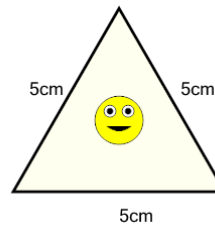
How long is the fence around this garden?



A	15ft	B	13ft
C	11ft	D	21ft
E	10ft	F	14ft

4

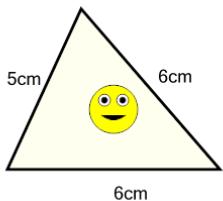
How long is the border around the outside of this painting?



A	15cm	B	11cm
C	14cm	D	21cm
E	10cm	F	18cm

5

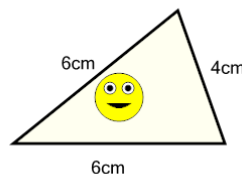
How long is the border around the outside of this painting?



A	25cm	B	11cm
C	18cm	D	12cm
E	13cm	F	17cm

6

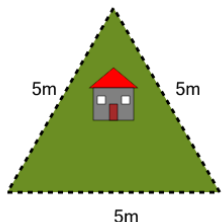
How long is the border around the outside of this painting?



A	17cm	B	18cm
C	11cm	D	6cm
E	16cm	F	8cm

7

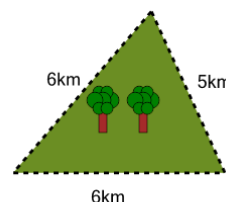
How long is the fence around this yard?



A	7m	B	15m
C	18m	D	8m
E	6m	F	17m

8

How far is it to run around the outside of this park?



A	8km	B	18km
C	17km	D	26km
E	14km	F	11km