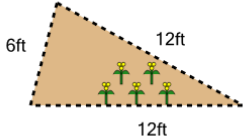




## Perimeter of a Triangle - Picture Intro

**1**

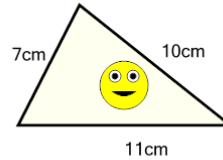
How long is the fence around this garden?



A	54ft	B	15ft
C	42ft	D	18ft
E	57ft	F	30ft

**2**

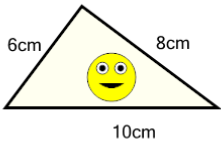
How long is the border around the outside of this painting?



A	28cm	B	40cm
C	44cm	D	34cm
E	26cm	F	22cm

**3**

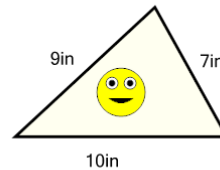
How long is the border around the outside of this painting?



A	8cm	B	24cm
C	34cm	D	4cm
E	12cm	F	20cm

**4**

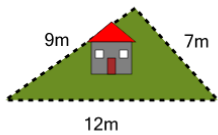
How long is the border around the outside of this painting?



A	20in	B	42in
C	28in	D	38in
E	14in	F	26in

**5**

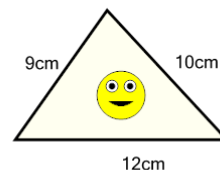
How long is the fence around this yard?



A	12m	B	8m
C	28m	D	16m
E	26m	F	24m

**6**

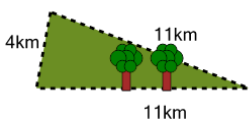
How long is the border around the outside of this painting?



A	49cm	B	28cm
C	31cm	D	52cm
E	4cm	F	37cm

**7**

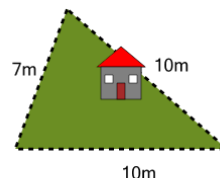
How far is it to run around the outside of this park?



A	8km	B	26km
C	44km	D	16km
E	30km	F	12km

**8**

How long is the fence around this yard?



A	41m	B	25m
C	43m	D	27m
E	39m	F	15m