
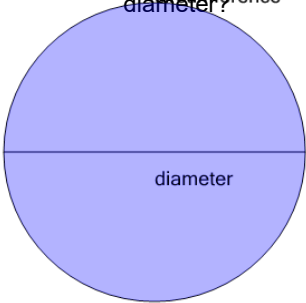




Pi - Definition to Name - First Time

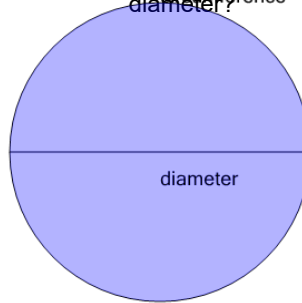


1 What is the name for the ratio of a circle's circumference to its diameter?



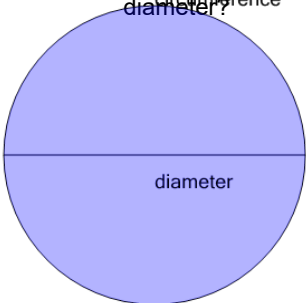
- | | | | |
|---|---------|---|----------|
| A | Pixar | B | Pastrami |
| C | Pegasus | D | Pi |
| | | | |

2 What is the name for the ratio of a circle's circumference to its diameter?



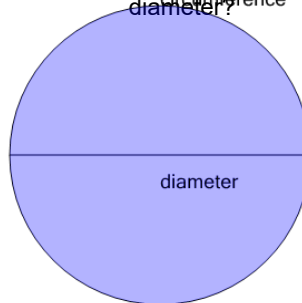
- | | | | |
|---|-----------|---|----------|
| A | Postulate | B | Practice |
| C | Portal | D | Pi |
| | | | |

3 What is the name for the ratio of a circle's circumference to its diameter?



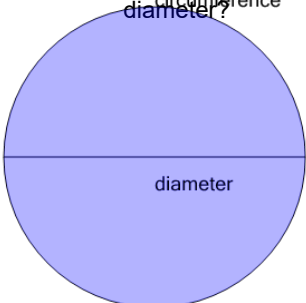
- | | | | |
|---|-----------|---|----------|
| A | Postulate | B | Practice |
| C | Pizza | D | Pi |
| | | | |

4 What is the name for the ratio of a circle's circumference to its diameter?



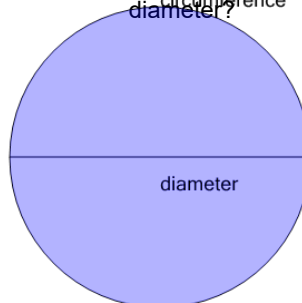
- | | | | |
|---|-------------|---|---------|
| A | Pontificate | B | Portal |
| C | Pi | D | Pegasus |
| | | | |

5 What is the name for the ratio of a circle's circumference to its diameter?



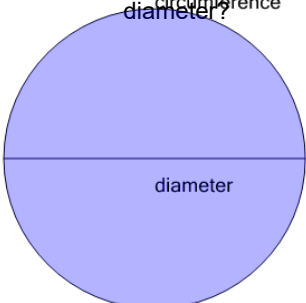
- | | | | |
|---|-------------|---|-------|
| A | Pontificate | B | Pizza |
| C | Pixar | D | Pi |
| | | | |

6 What is the name for the ratio of a circle's circumference to its diameter?



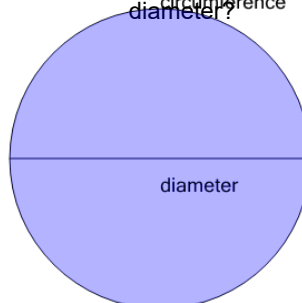
- | | | | |
|---|-----------|---|----------|
| A | Postulate | B | Pi |
| C | Pixar | D | Practice |
| | | | |

7 What is the name for the ratio of a circle's circumference to its diameter?



- | | | | |
|---|----------|---|----------|
| A | Parallel | B | Pi |
| C | Pizza | D | Pastrami |
| | | | |

8 What is the name for the ratio of a circle's circumference to its diameter?



- | | | | |
|---|----------|---|--------|
| A | Pastrami | B | Portal |
| C | Pi | D | Pixar |
| | | | |