


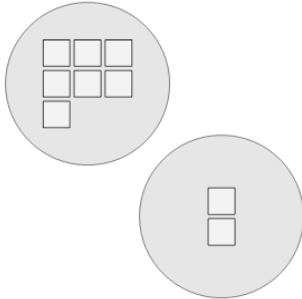


Picture Numbers - Adding - Picture to Equation



1

Choose the addition sentence for the white squares?



A

$10 + 2$

B

$7 + 2$

C

$3 + 2$

D

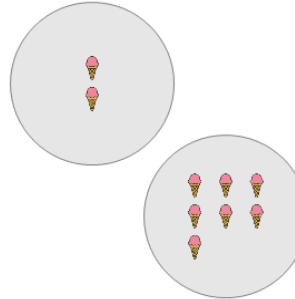
$9 + 2$

E

$6 + 2$

2

Choose the addition sentence for the orange ice creams?



A

$2 + 3$

B

$0 + 7$

C

$2 + 11$

D

$3 + 7$

E

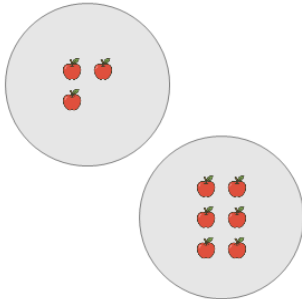
$2 + 7$

F

$1 + 7$

3

Choose the addition sentence for the orange apples?



A

$5 + 6$

B

$3 + 6$

C

$3 + 1$

D

$3 + 2$

E

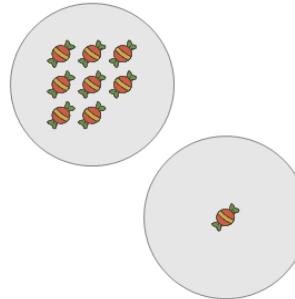
$0 + 6$

F

$3 + 8$

4

Choose the addition sentence for the red candies?



A

$8 + 4$

B

$8 + 3$

C

$6 + 1$

D

$10 + 1$

E

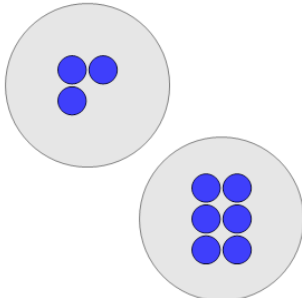
$9 + 1$

F

$8 + 1$

5

Choose the addition sentence for the blue circles?



A

$3 + 10$

B

$3 + 3$

C

$2 + 6$

D

$3 + 1$

E

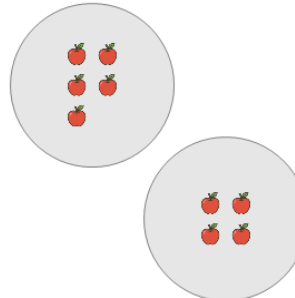
$3 + 8$

F

$3 + 6$

6

Choose the addition sentence for the orange apples?



A

$2 + 4$

B

$5 + 7$

C

$5 + 1$

D

$5 + 4$

E

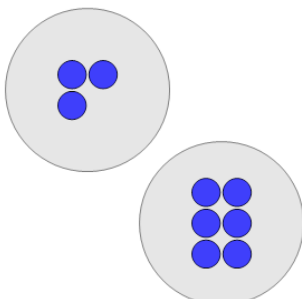
$5 + 5$

F

$4 + 4$

7

Choose the addition sentence for the blue circles?



A

$1 + 6$

B

$3 + 6$

C

$6 + 6$

D

$3 + 5$

E

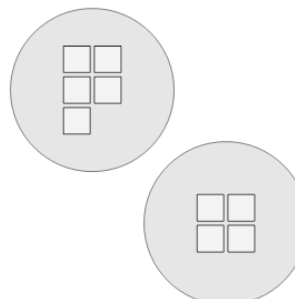
$0 + 6$

F

$2 + 6$

8

Choose the addition sentence for the white squares?



A

$5 + 4$

B

$9 + 4$

C

$5 + 0$

D

$7 + 4$

E

$3 + 4$

F

$5 + 3$