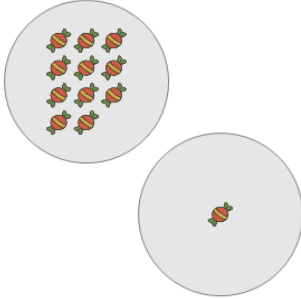


Picture Numbers - Adding - Picture to Equation

1

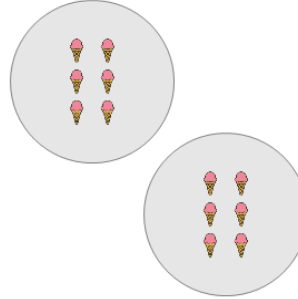
Choose the addition sentence for the red candies?



A $15 + 1$	B $6 + 1$
C $9 + 1$	D $11 + 3$
E $14 + 1$	F $11 + 1$

2

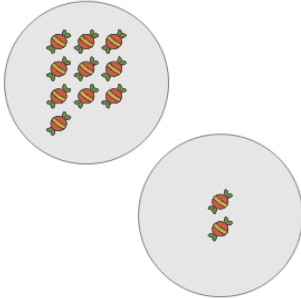
Choose the addition sentence for the orange ice creams?



A $6 + 4$	B $2 + 6$	C $6 + 6$
D $6 + 2$	E $6 + 8$	F $1 + 6$

3

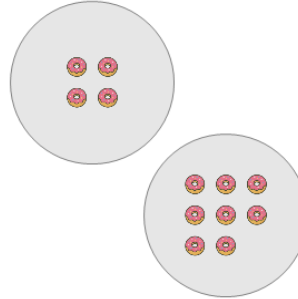
Choose the addition sentence for the red candies?



A $8 + 2$	B $10 + 1$
C $10 + 2$	D $10 + 5$
E $6 + 2$	

4

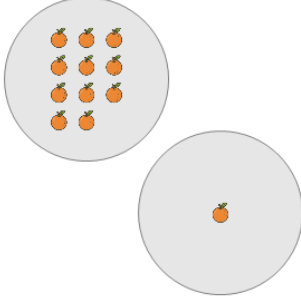
Choose the addition sentence for the orange donuts?



A $4 + 8$	B $4 + 6$
C $4 + 10$	D $3 + 8$
E $1 + 8$	F $4 + 9$

5

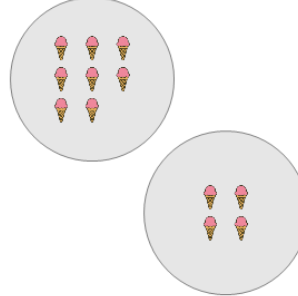
Choose the addition sentence for the orange oranges?



A $11 + 4$	B $10 + 1$
C $11 + 2$	D $11 + 1$
E $7 + 1$	F $13 + 1$

6

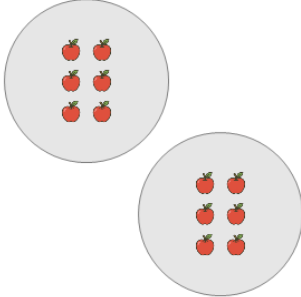
Choose the addition sentence for the orange ice creams?



A $8 + 6$	B $8 + 7$
C $12 + 4$	D $10 + 4$
E $8 + 4$	F $9 + 4$

7

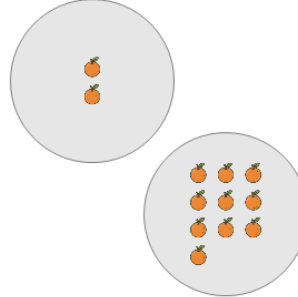
Choose the addition sentence for the orange apples?



A $2 + 6$	B $6 + 2$	C $6 + 8$
D $5 + 6$	E $6 + 7$	F $6 + 6$

8

Choose the addition sentence for the orange oranges?



A $2 + 8$	B $2 + 13$
C $2 + 10$	D $1 + 10$
E $3 + 10$	F $2 + 14$