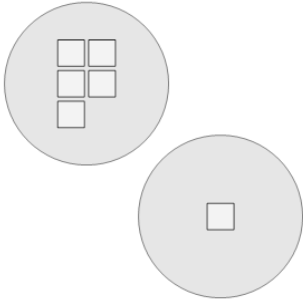


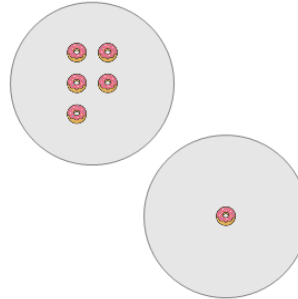
Picture Numbers - Adding - Picture to Number

1 How many white squares are there?



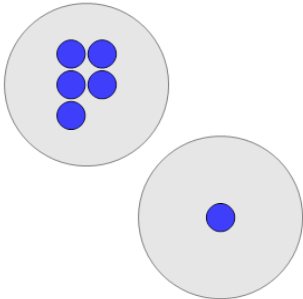
A	B	C
2	4	3
D	E	F
8	6	1

2 How many orange donuts are there?



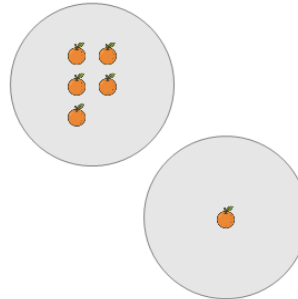
A	B	C
9	10	4
D	E	F
6	8	3

3 How many blue circles are there?



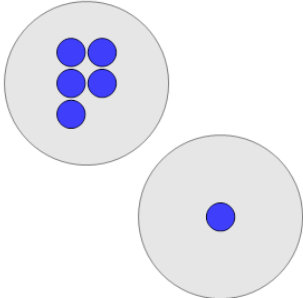
A	B	C
10	9	1
D	E	F
6	8	4

4 How many orange oranges are there?



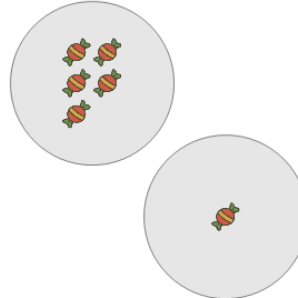
A	B	C
2	9	4
D	E	F
1	6	8

5 How many blue circles are there?



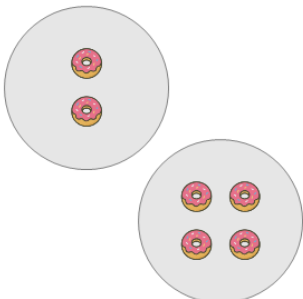
A	B	C
2	6	8
D	E	
10	4	

6 How many red candies are there?



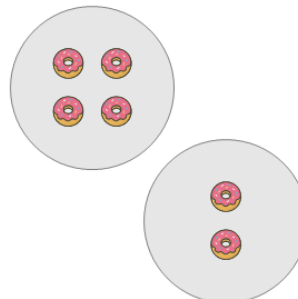
A	B	C
2	10	9
D	E	F
6	8	3

7 How many orange donuts are there?



A	B	C
1	9	6
D	E	F
10	8	2

8 How many orange donuts are there?



A	B	C
8	6	2
D	E	F
1	4	3