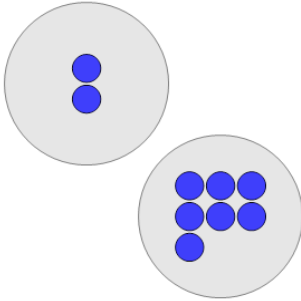


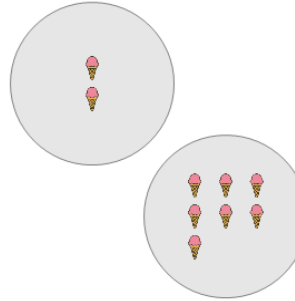
Picture Numbers - Adding - Picture to Number

1 How many blue circles are there?



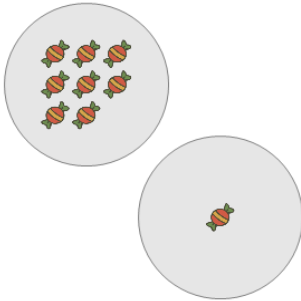
A	B	C
6	9	5
D	E	
13	11	

2 How many orange ice creams are there?



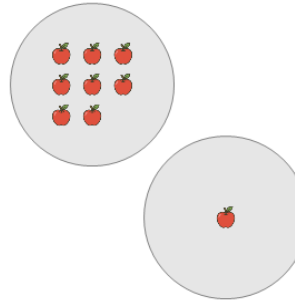
A	B	C
11	7	12
D	E	F
6	13	9

3 How many red candies are there?



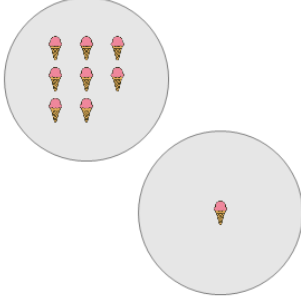
A	B	C
13	12	6
D	E	F
7	9	5

4 How many orange apples are there?



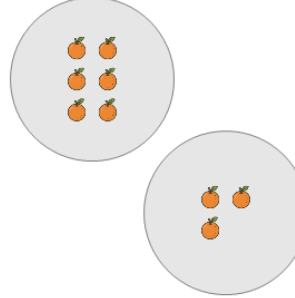
A	B	C
4	12	5
D	E	
13	9	

5 How many orange ice creams are there?



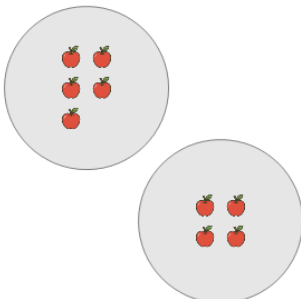
A	B	C
9	5	7
D	E	F
12	6	13

6 How many orange oranges are there?



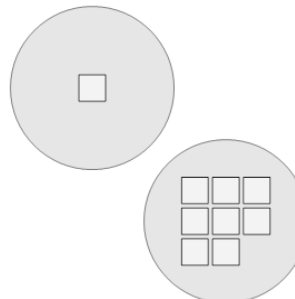
A	B	C
5	12	9
D	E	F
11	4	7

7 How many orange apples are there?



A	B	C
12	13	5
D	E	F
6	9	11

8 How many white squares are there?



A	B	C
9	5	4
D	E	F
7	6	11