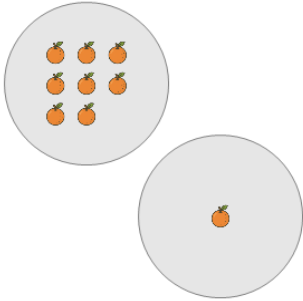


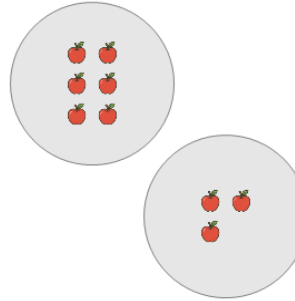
Picture Numbers - Adding - Picture to Word

1 How many orange oranges are there?



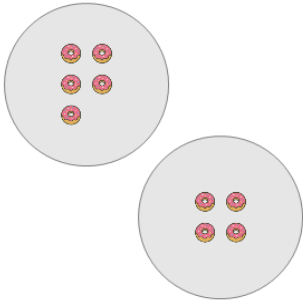
- | | |
|---------------|------------|
| A
twelve | B
five |
| C
four | D
seven |
| E
thirteen | F
nine |

2 How many orange apples are there?



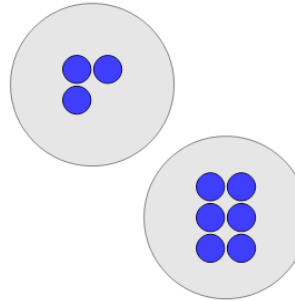
- | | |
|---------------|-------------|
| A
thirteen | B
six |
| C
four | D
nine |
| E
seven | F
eleven |

3 How many orange donuts are there?



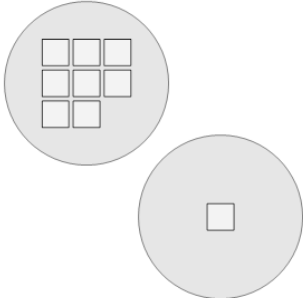
- | | |
|-------------|-------------|
| A
five | B
six |
| C
nine | D
four |
| E
eleven | F
twelve |

4 How many blue circles are there?



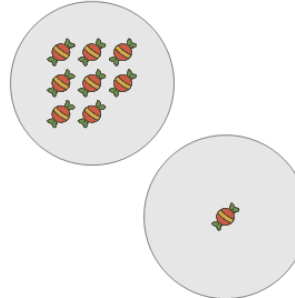
- | | |
|------------|-------------|
| A
seven | B
nine |
| C
five | D
eleven |
| E
six | F
twelve |

5 How many white squares are there?



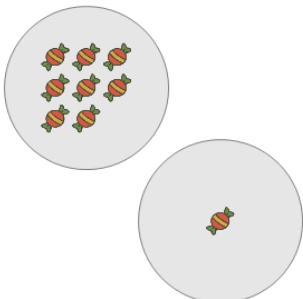
- | | |
|-------------|---------------|
| A
twelve | B
six |
| C
nine | D
thirteen |
| E
five | F
seven |

6 How many red candies are there?



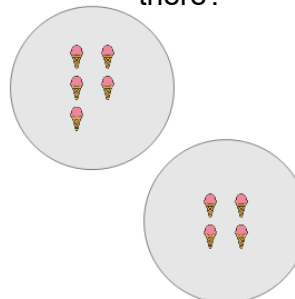
- | | |
|---------------|-------------|
| A
thirteen | B
five |
| C
seven | D
nine |
| E
six | F
twelve |

7 How many red candies are there?



- | | |
|---------------|-----------|
| A
eleven | B
four |
| C
thirteen | D
nine |
| E
seven | |

8 How many orange ice creams are there?



- | | |
|---------------|-------------|
| A
thirteen | B
four |
| C
seven | D
twelve |
| E
nine | |