
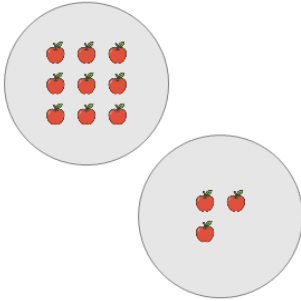




Picture Numbers - Adding - Picture to Word

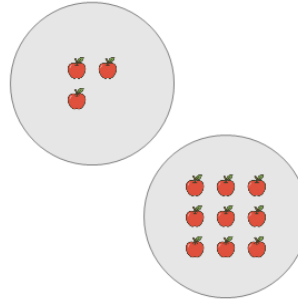


1 How many orange apples are there?



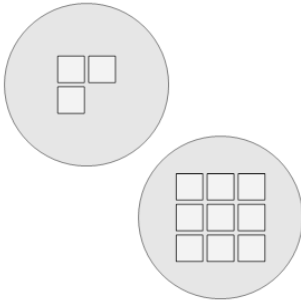
- | | | | |
|---|---------|---|---------|
| A | ten | B | twelve |
| C | fifteen | D | sixteen |
| E | seven | F | eight |

2 How many orange apples are there?



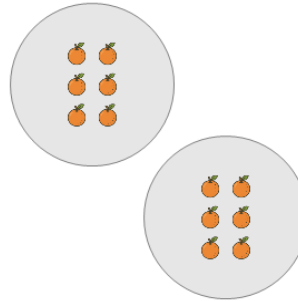
- | | | | |
|---|---------|---|---------|
| A | twelve | B | ten |
| C | sixteen | D | fifteen |
| E | eight | | |

3 How many white squares are there?



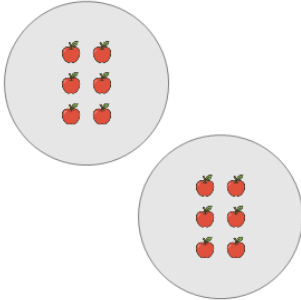
- | | | | |
|---|---------|---|----------|
| A | fifteen | B | sixteen |
| C | eight | D | twelve |
| E | seven | F | fourteen |

4 How many orange oranges are there?



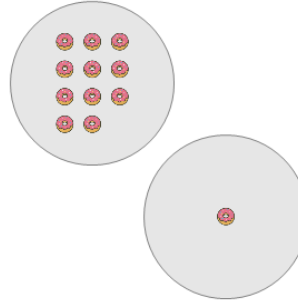
- | | | | |
|---|---------|---|----------|
| A | twelve | B | seven |
| C | fifteen | D | fourteen |
| E | ten | F | eight |

5 How many orange apples are there?



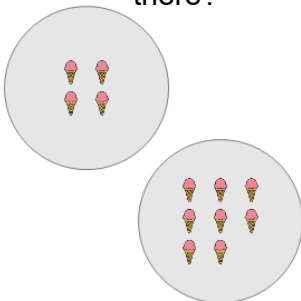
- | | | | |
|---|----------|---|---------|
| A | fourteen | B | nine |
| C | fifteen | D | eight |
| E | twelve | F | sixteen |

6 How many orange donuts are there?



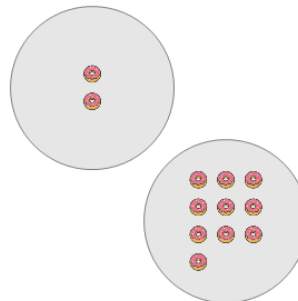
- | | | | |
|---|----------|---|---------|
| A | seven | B | twelve |
| C | fourteen | D | fifteen |
| E | nine | F | ten |

7 How many orange ice creams are there?



- | | | | |
|---|----------|---|---------|
| A | seven | B | twelve |
| C | fourteen | D | sixteen |
| E | eight | F | nine |

8 How many orange donuts are there?



- | | | | |
|---|-------|---|---------|
| A | ten | B | twelve |
| C | nine | D | eight |
| E | seven | F | fifteen |