

## Picture Numbers - Counting - Picture (Random) to Word

**1**

How many ice creams are shown?



A

four

B

three

C

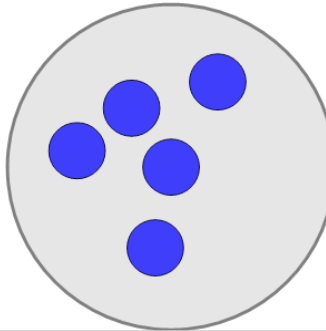
five

D

one

**2**

How many circles are shown?



A

three

B

nine

C

five

D


seven

E

eight

**3**

How many candies are shown?



A

four

B

zero

C

eight

D


one

E

six

**4**

How many candies are shown?



A

three

B

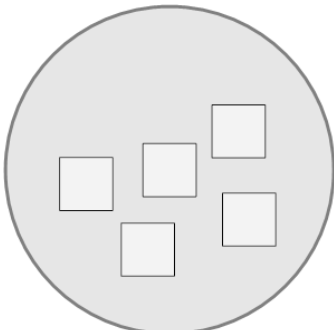
one

C

five

**5**

How many squares are shown?



A

three

B

nine

C

two

D

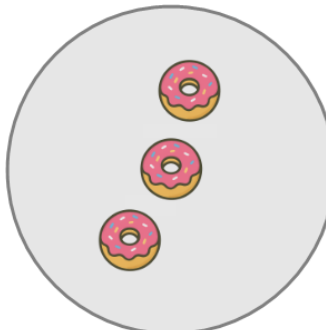
five

E

seven

**6**

How many donuts are shown?



A

six

B


three

C

seven

**7**

How many apples are shown?



A

one

B

two

C

six

D

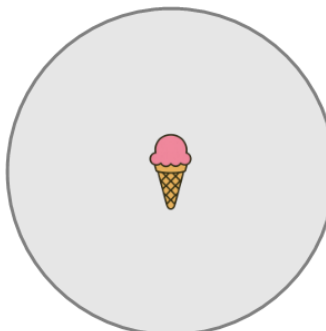
four

E

eight

**8**

How many ice creams are shown?



A

three

B

four

C

one