
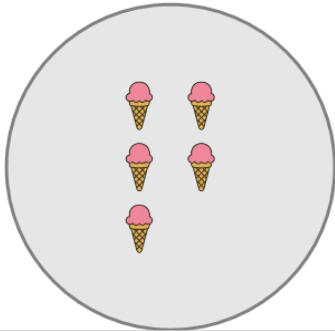




Picture Numbers - Counting - Picture to Number

**1**

How many ice creams are shown?



A

2

B

3

C

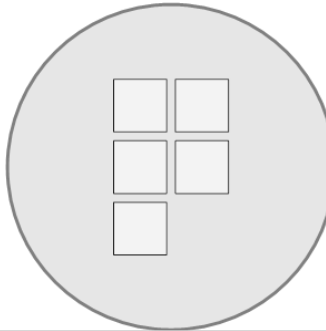
5

D

0

2

How many squares are shown?



A

5

B

0

C

9

D

1

E

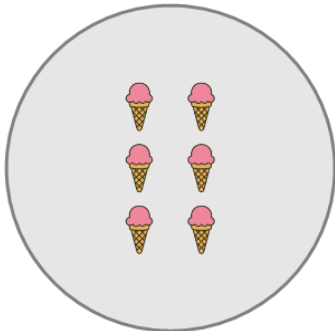
3

F

7

3

How many ice creams are shown?



A

4

B

6

C

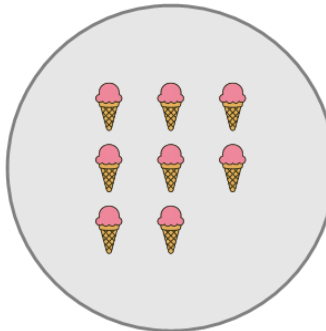
10

D

7

4

How many ice creams are shown?



A

11

B

3

C

10

D

5

E

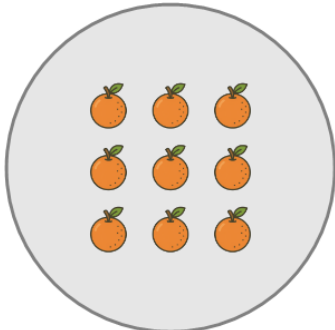
8

F

4

5

How many oranges are shown?



A

9

B

13

C

6

D

7

E

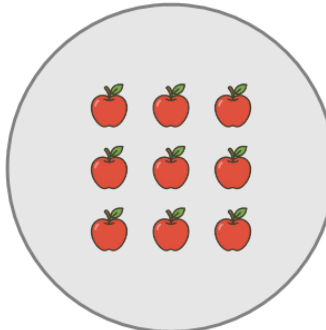
12

F

11

6

How many apples are shown?



A

12

B

9

C

13

D

5

E

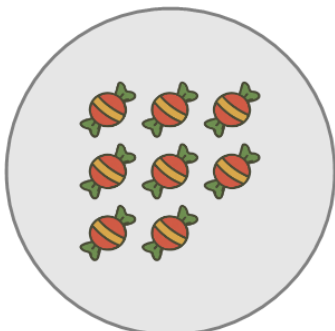
11

F

4

7

How many candies are shown?



A

8

B

4

C

3

D

6

E

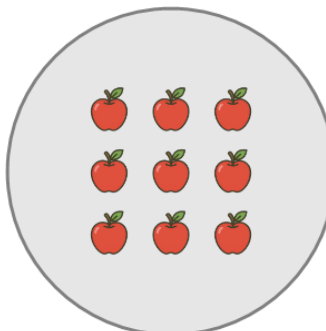
5

F

10

8

How many apples are shown?



A

13

B

6

C

12

D

9

E

4

F

11