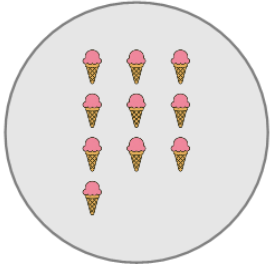
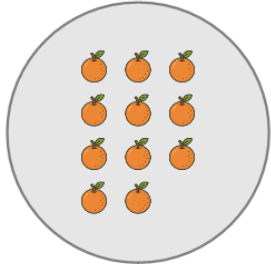
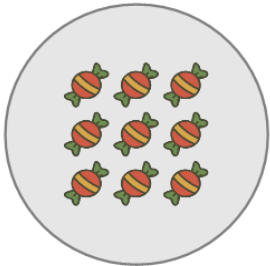
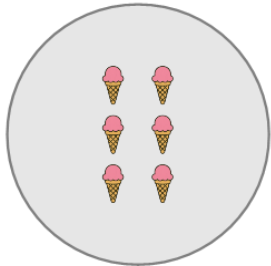
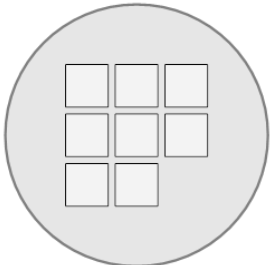
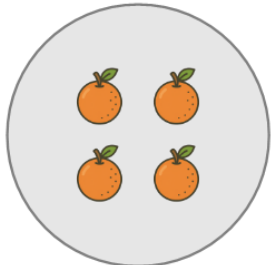
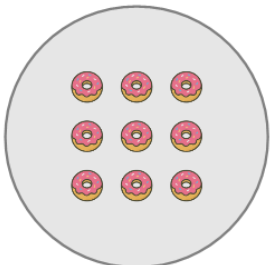
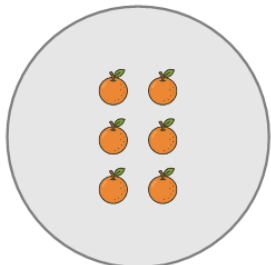




Picture Numbers - Subtracting - Picture and Instruction to Word



1 How many orange ice creams will be left if you remove 3?  Remove 3 ice cream	A eleven	B three	2 How many orange oranges will be left if you remove 5?  Remove 5 oranges	A one	B two	C six	
	C five	D nine		D ten	E four	F eight	
	E seven	F four					
3 How many red candies will be left if you remove 8?  Remove 8 candies	A one	B four	C three	4 How many orange ice creams will be left if you remove 5?  Remove 5 ice cream	A three	B one	C five
	D five				D four		
5 How many white squares will be left if you remove 7?  Remove 7 squares	A three	B four	C one	6 How many orange oranges will be left if you remove 1?  Remove 1 orange	A three	B one	C five
					D six	E zero	
7 How many orange donuts will be left if you remove 4?  Remove 4 donuts	A five	B two	C zero	8 How many orange oranges will be left if you remove 1?  Remove 1 orange	A zero	B two	C seven
	D three	E nine	F one		D five	E three	F nine