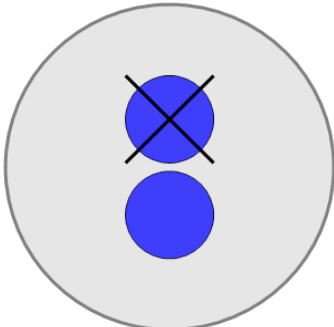




Picture Numbers - Subtracting - Picture to Equation

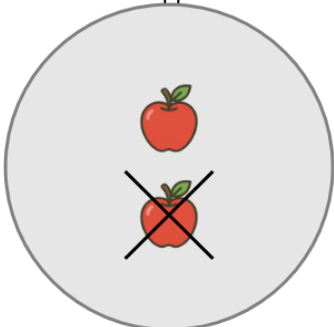


1 Choose the subtraction sentence for the blue circles?



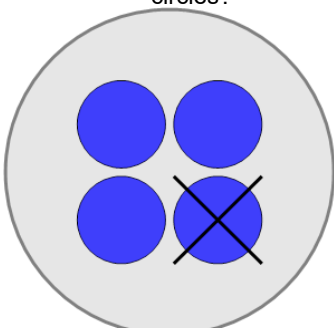
A	B	C
$2 - 5$	$2 - 1$	$1 - 1$
D	E	F
$2 - 0$	$3 - 1$	$4 - 1$

2 Choose the subtraction sentence for the orange apples?



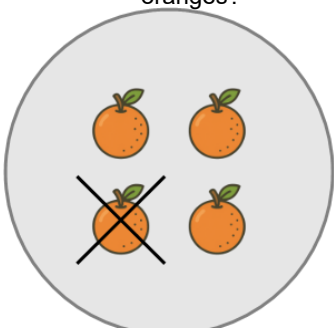
A	B	C
$3 - 1$	$2 - 3$	$2 - 1$
D	E	F
$5 - 1$	$4 - 1$	$2 - 4$

3 Choose the subtraction sentence for the blue circles?



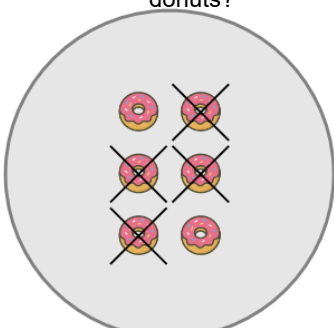
A	B	C
$4 - 2$	$4 - 1$	$0 - 1$
D	E	F
$4 - 4$	$1 - 1$	$3 - 1$

4 Choose the subtraction sentence for the orange oranges?




A	B	C
$4 - 1$	$4 - 4$	$8 - 1$
D	E	F
$4 - 2$	$4 - 3$	$3 - 1$

5 Choose the subtraction sentence for the orange donuts?



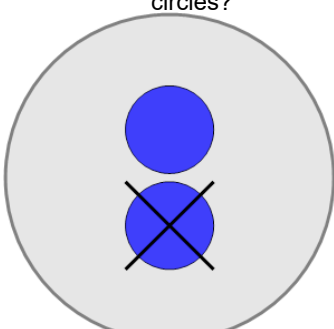
A	B	C
$7 - 4$	$1 - 4$	$6 - 4$
D	E	
$6 - 0$	$6 - 3$	

6 Choose the subtraction sentence for the orange ice creams?



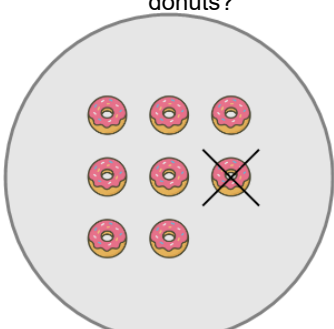
A	B
$7 - 5$	$8 - 4$
C	D
$7 - 4$	$11 - 4$
E	F
$7 - 1$	$7 - 7$

7 Choose the subtraction sentence for the blue circles?



A	B	C
$2 - 4$	$2 - 1$	$2 - 5$
D	E	
$2 - 3$	$4 - 1$	

8 Choose the subtraction sentence for the orange donuts?



A	B	C
$8 - 1$	$8 - 2$	$8 - 3$
D	E	F
$8 - 5$	$6 - 1$	$3 - 1$