
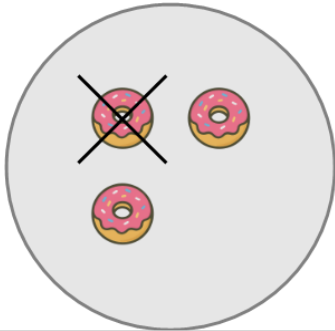




Picture Numbers - Subtracting - Picture to Number

**1**

How many orange donuts are left?



A

2

B

5

C

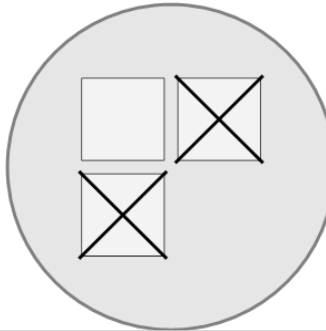
6

D

0

2

How many white squares are left?



A

1

B

5

C

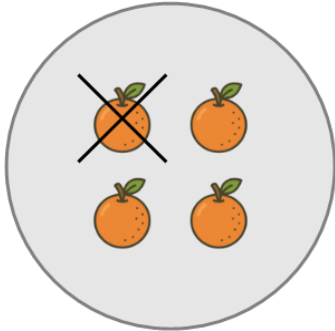
3

D

4

3

How many orange oranges are left?



A

5

B

6

C

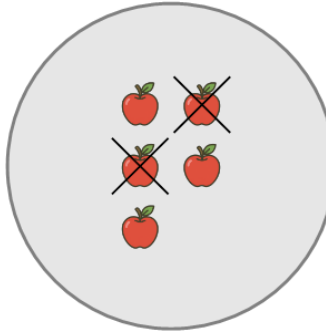
3

D

1

4

How many orange apples are left?



A

3

B

0

C

5

D

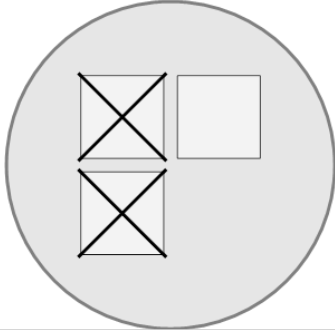
6

E

1

5

How many white squares are left?



A

3

B

4

C

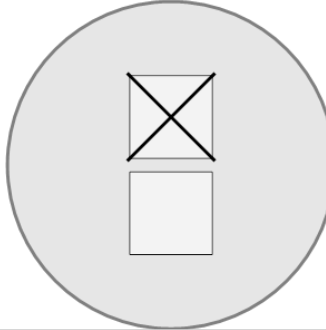
1

D

5

6

How many white squares are left?



A

3

B

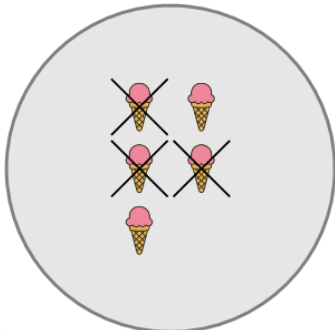
4

C

1

7

How many orange ice creams are left?



A

5

B

4

C

2

D

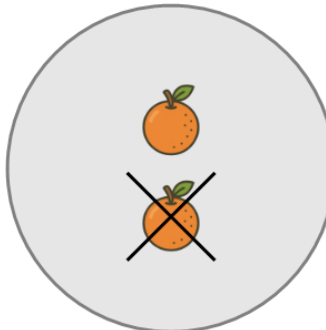
6

E

0

8

How many orange oranges are left?



A

5

B

4

C

1

D

3