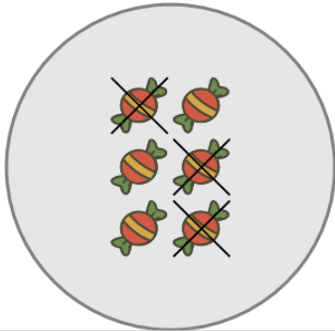




## Picture Numbers - Subtracting - Picture to Number

**1**

How many red candies are left?



A

5

B

1

C

6

D

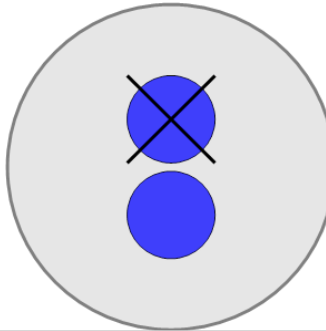
7

E

3

**2**

How many blue circles are left?



A

5

B

4

C

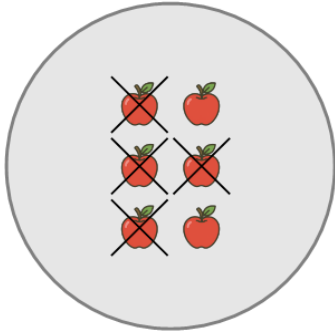
1

D

3

**3**

How many orange apples are left?



A

5

B

4

C

2

D

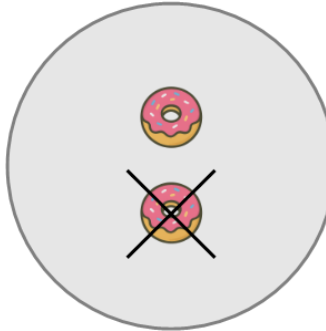
0

E

6

**4**

How many orange donuts are left?



A

5

B

3

C

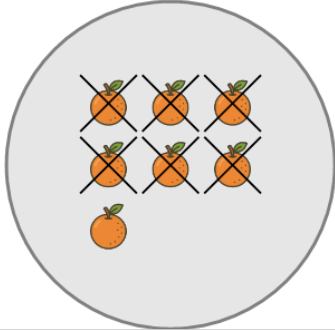
4

D

1

**5**

How many orange oranges are left?



A

4

B

3

C

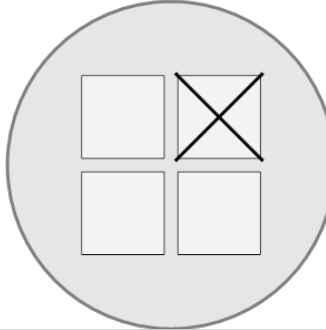
1

D

5

**6**

How many white squares are left?



A

5

B

7

C

6

D

3

E

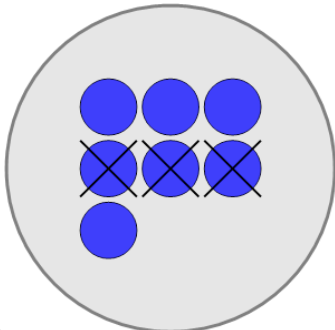
0

F

1

**7**

How many blue circles are left?



A

6

B

2

C

0

D

7

E

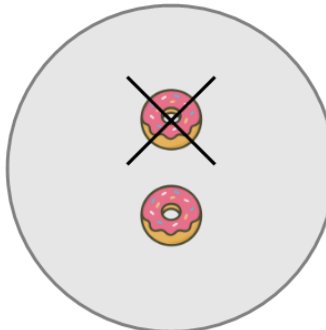
4

F

1

**8**

How many orange donuts are left?



A

5

B

4

C

1