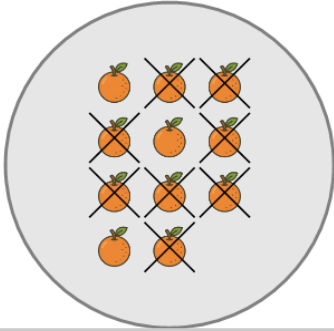




Picture Numbers - Subtracting - Picture to Number




1 How many orange oranges are left?



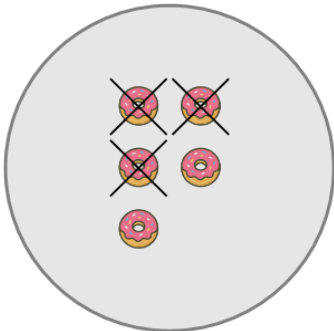
A	B	C
3	7	5
D	E	F
0	6	1

2 How many orange ice creams are left?



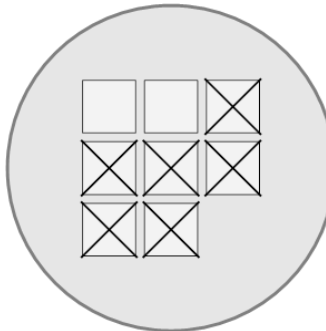
A	B	C
2	4	0
D	E	
8	1	

3 How many orange donuts are left?




A	B	C
6	2	5

4 How many white squares are left?



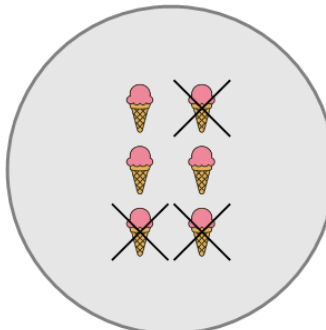
A	B	C
2	4	5
D	E	
6	0	

5 How many orange ice creams are left?



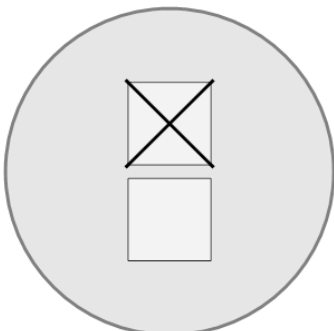
A	B	C
7	1	8
D	E	F
4	6	0

6 How many orange ice creams are left?




A	B	C
1	7	6
D	E	
3	5	

7 How many white squares are left?



A	B	C
4	5	3
D		
1		

8 How many orange ice creams are left?



A	B	C
5	6	4
D	E	
0	2	