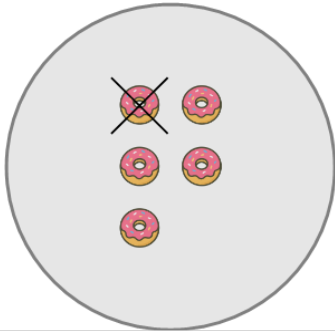




Picture Numbers - Subtracting - Picture to Word

**1**

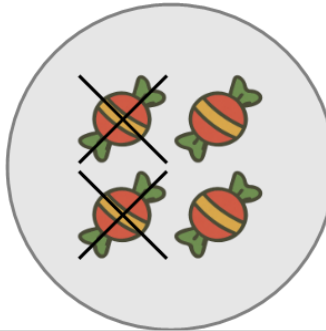
How many orange donuts are left?



A	B	C
four	seven	six
D	E	F
one	two	zero

2

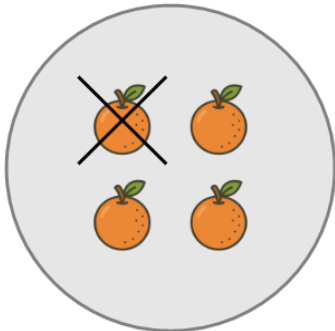
How many red candies are left?



A	B	C
four	six	two
D		
five		

3

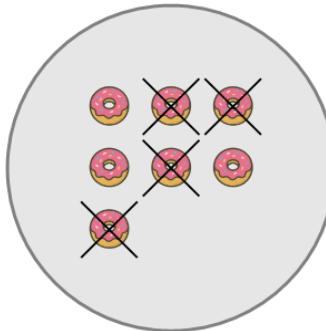
How many orange oranges are left?



A	B	C
seven	six	one
D		
three		

4

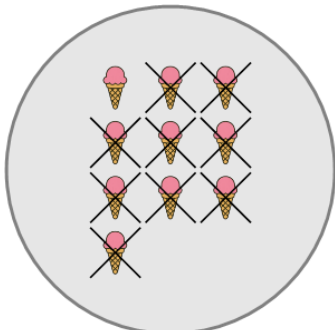
How many orange donuts are left?



A	B	C
five	three	seven
D		
one		

5

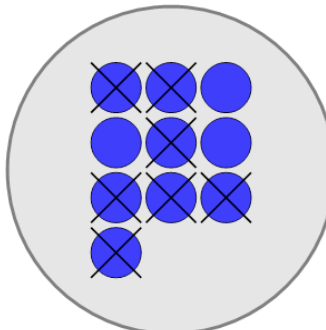
How many orange ice creams are left?



A	B	C
three	five	four
D		
one		

6

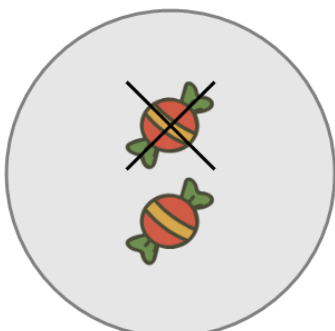
How many blue circles are left?



A	B	C
six	zero	five
D	E	
one	three	

7

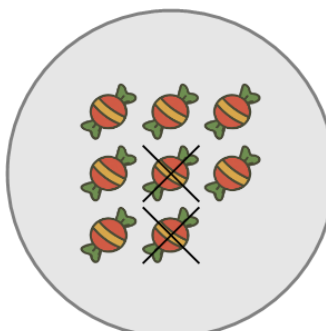
How many red candies are left?



A	B	C
four	one	three
D		
five		

8

How many red candies are left?



A	B	C
ten	six	nine
D	E	
two	three	