

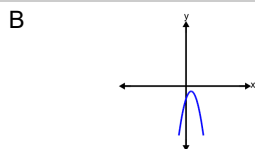
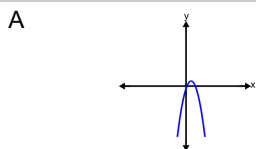


Quadratics Vertex Form - Equation to Graph



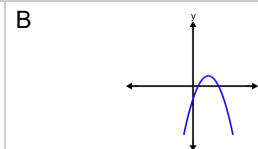
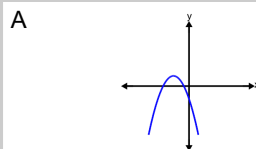
1 Which graph shows this quadratic function?

$$y = -1.5(x - 1)^2 + 1$$



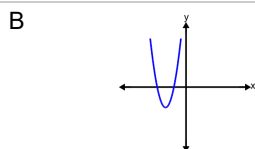
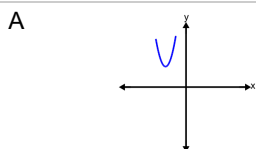
2 Which graph shows this quadratic function?

$$y = -0.5(x + 3)^2 + 2$$



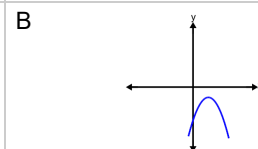
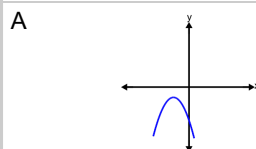
3 Which graph shows this quadratic function?

$$y = 1.5(x + 4)^2 - 4$$



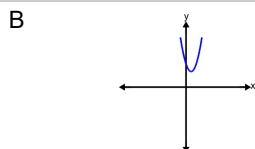
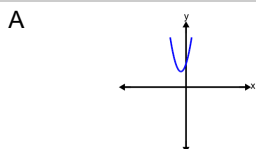
4 Which graph shows this quadratic function?

$$y = -0.5(x + 3)^2 - 2$$



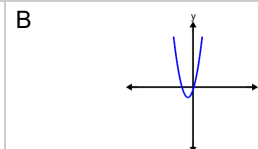
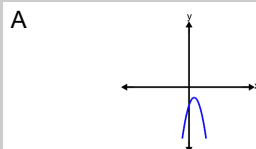
5 Which graph shows this quadratic function?

$$y = 1.5(x + 1)^2 + 3$$



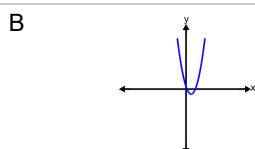
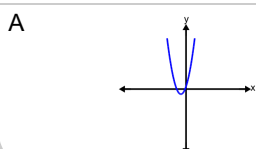
6 Which graph shows this quadratic function?

$$y = 1.5(x + 1)^2 - 2$$



7 Which graph shows this quadratic function?

$$y = 1.5(x + 1)^2 - 1$$



8 Which graph shows this quadratic function?

$$y = -0.5(x - 4)^2 + 4$$

