




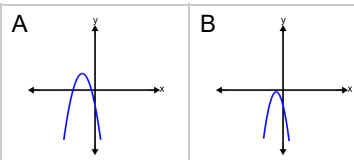
Quadratic Discriminants - Value to Graph



1

Which graph shows this a quadratic function with this discriminant?

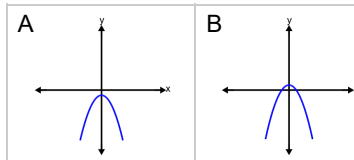
$$\Delta = 13$$



2

Which graph shows this a quadratic function with this discriminant?

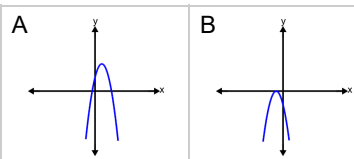
$$\Delta = 2$$



3

Which graph shows this a quadratic function with this discriminant?

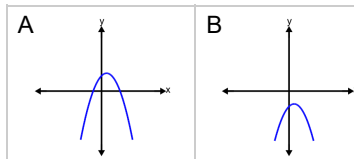
$$\Delta = 0$$



4

Which graph shows this a quadratic function with this discriminant?

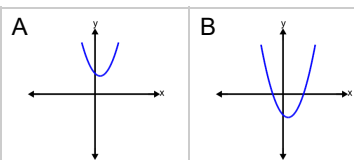
$$\Delta = 7$$



5

Which graph shows this a quadratic function with this discriminant?

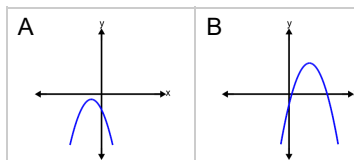
$$\Delta = -7$$



6

Which graph shows this a quadratic function with this discriminant?

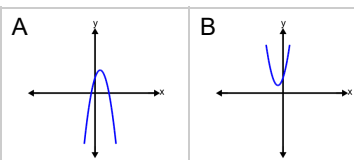
$$\Delta = 12$$



7

Which graph shows this a quadratic function with this discriminant?

$$\Delta = 27$$



8

Which graph shows this a quadratic function with this discriminant?

$$\Delta = -5$$

