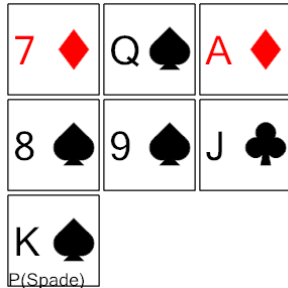


## Probability - Cards, From Hand, Pick One of Group, To Percent

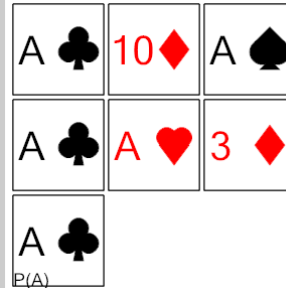
1



Calculate the probability of drawing any Spade. Show as a percent

A	86%	B	57%
C	67%	D	100%
E	14%	F	53%

2



Calculate the probability of drawing any Ace. Show as a percent

A	71%	B	60%
C	100%	D	50%
E	167%	F	57%

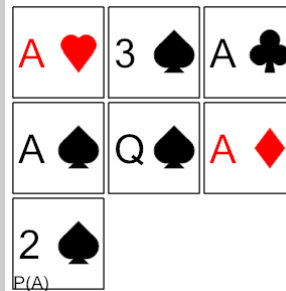
3



Calculate the probability of drawing any King. Show as a percent

A	100%	B	17%
C	25%	D	33%
E	27%	F	125%

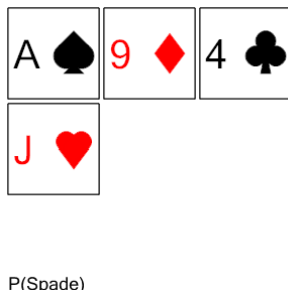
4



Calculate the probability of drawing any Ace. Show as a percent

A	57%	B	14%
C	200%	D	114%
E	86%	F	80%

5



Calculate the probability of drawing any Spade. Show as a percent

A	75%	B	29%
C	17%	D	100%
E	25%	F	27%


6



Calculate the probability of drawing any King. Show as a percent

A	16%	B	14%
C	17%	D	15%
E	29%	F	100%

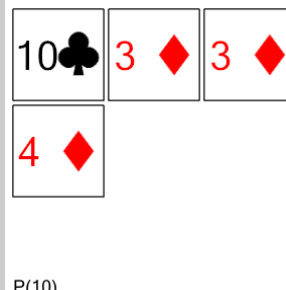
7



Calculate the probability of drawing any Heart. Show as a percent

A	29%	B	84%
C	56%	D	86%
E	65%	F	71%

8



Calculate the probability of drawing any 10. Show as a percent

A	24%	B	100%
C	50%	D	30%
E	75%	F	25%