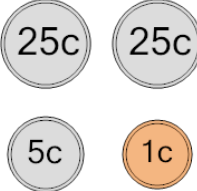
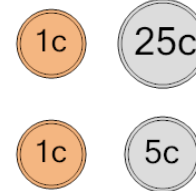
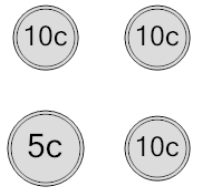
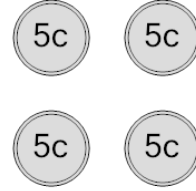
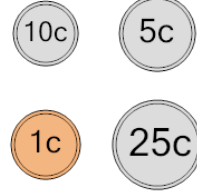
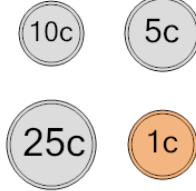
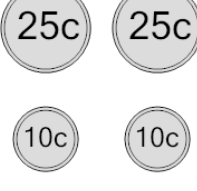
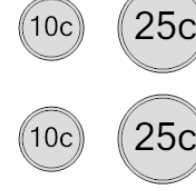


Probability - Coins (4), All Same, To Decimal

<p>1 What is the chance of flipping all heads or all tails on these coins?</p> 	A 0.091	B 0.111	C 0.125	<p>2 What is the chance of flipping all heads or all tails on these coins?</p> 	A 0.222	B 0.333	C 0.167
	D 0.154	E 0.105	F 0.083		D 0.2	E 0.143	F 0.125
<p>3 What is the chance of flipping all heads or all tails on these coins?</p> 	A 0.125	B 0.091	C 0.143	<p>4 What is the chance of flipping all heads or all tails on these coins?</p> 	A 0.176	B 0.333	C 0.2
	D 0.231	E 0.167	F 0.2		D 0.182	E 0.273	F 0.125
<p>5 What is the chance of flipping all heads or all tails on these coins?</p> 	A 0.059	B 0.125	C 0.182	<p>6 What is the chance of flipping all heads or all tails on these coins?</p> 	A 0.111	B 0.118	C 0.5
	D 0.077	E 0.75	F 0.25		D 0.125	E 0.25	F 0.143
<p>7 What is the chance of flipping all heads or all tails on these coins?</p> 	A 0.429	B 0.067	C 0.158	<p>8 What is the chance of flipping all heads or all tails on these coins?</p> 	A 0.1	B 0.067	C 0.333
	D 1	E 0.2	F 0.125		D 0.6	E 0.2	F 0.125