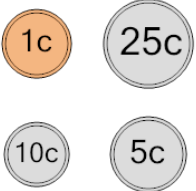
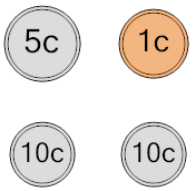
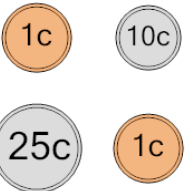
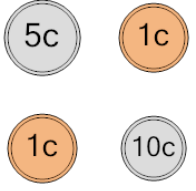
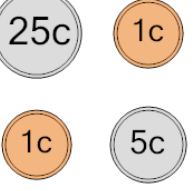
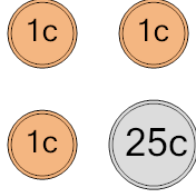
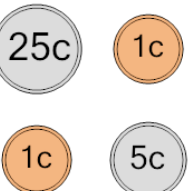
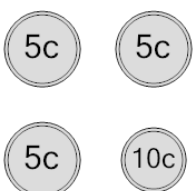




Probability - Coins (4), All Specific, To Percent

1 What is the chance of flipping heads on all these coins? 	A 6.3%	B 60%	C 7.4%	2 What is the chance of flipping heads on all these coins? 	A 13%	B 16.7%	C 10%
	D 4%	E 60%	F 50%		D 6.3%	E 8.3%	F 7.7%
3 What is the chance of flipping tails on all these coins? 	A 6.7%	B 6.3%	C 25%	4 What is the chance of flipping heads on all these coins? 	A 10%	B 7.1%	C 12%
	D 14.3%	E 42.9%	F 4.5%		D 20%	E 6.3%	F 27.3%
5 What is the chance of flipping tails on all these coins? 	A 27.3%	B 20%	C 11.1%	6 What is the chance of flipping heads on all these coins? 	A 9.1%	B 5.3%	C 5.7%
	D 6.9%	E 3.6%	F 6.3%		D 11.1%	E 6.3%	F 25%
7 What is the chance of flipping heads on all these coins? 	A 50%	B 11.1%	C 6.3%	8 What is the chance of flipping heads on all these coins? 	A 9.1%	B 4.8%	C 14.3%
	D 4.5%	E 6.1%	F 25%		D 18.2%	E 6.3%	F 3.2%