











Probability - Coins (2), All Same, To Decimal

1 What is the chance of flipping both heads or both tails on these coins? 	A 0.5 D 0.667	B 0.333 E 0.4	C 0.75 F 1	2 What is the chance of flipping both heads or both tails on these coins? 	A 0.2 D 0.667	B 0.143 E 1	C 0.286 F 0.5
3 What is the chance of flipping both heads or both tails on these coins? 	A 0.167 D 0.75	B 0.429 E 0.75	C 0.5 F 1	4 What is the chance of flipping both heads or both tails on these coins? 	A 0.5 D 0.6	B 0.2 E 0.143	C 0.667 F 0.429
5 What is the chance of flipping both heads or both tails on these coins? 	A 0.667 D 0.5	B 0.25 E 0.143	C 0.25 F 0.2	6 What is the chance of flipping both heads or both tails on these coins? 	A 0.429 D 0.75	B 0.167 E 0.5	C 0.75 F 0.167
7 What is the chance of flipping both heads or both tails on these coins? 	A 0.5 D 0.6	B 0.75 E 0.6	C 0.4 F 0.2	8 What is the chance of flipping both heads or both tails on these coins? 	A 0.2 D 0.6	B 0.143 E 0.333	C 0.5 F 0.333