



















Probability - Coins (2), All Specific, To Decimal



1 What is the chance of flipping heads on both these coins?  	A 0.667	B 0.25	C 0.111	2 What is the chance of flipping tails on both these coins?  	A 0.25	B 0.4	C 0.5
	D 0.125	E 0.111	F 0.167		D 0.2	E 0.6	F 0.2
3 What is the chance of flipping tails on both these coins?  	A 0.75	B 0.333	C 0.333	4 What is the chance of flipping heads on both these coins?  	A 0.273	B 0.25	C 0.333
	D 0.667	E 0.25	F 0.333		D 1	E 0.125	F 0.182
5 What is the chance of flipping tails on both these coins?  	A 0.667	B 0.125	C 0.5	6 What is the chance of flipping heads on both these coins?  	A 0.667	B 0.25	C 0.091
	D 0.25	E 0.3	F 0.375		D 0.6	E 0.6	F 0.167
7 What is the chance of flipping heads on both these coins?  	A 0.25	B 0.111	C 0.667	8 What is the chance of flipping tails on both these coins?  	A 0.25	B 0.2	C 0.273
	D 0.111	E 0.5	F 0.111		D 0.429	E 1	F 0.2