



















Probability - Coins (2), All Specific, To Percent

1 What is the chance of flipping heads on both these coins?  	A 42.9%	B 20%	C 22.2%	2 What is the chance of flipping heads on both these coins?  	A 14.3%	B 9.1%	C 33.3%
	D 33.3%	E 18.2%	F 25%		D 28.6%	E 20%	F 25%
3 What is the chance of flipping heads on both these coins?  	A 20%	B 33.3%	C 22.2%	4 What is the chance of flipping heads on both these coins?  	A 28.6%	B 22.2%	C 30%
	D 22.2%	E 33.3%	F 25%		D 25%	E 33.3%	F 30%
5 What is the chance of flipping tails on both these coins?  	A 33.3%	B 12.5%	C 33.3%	6 What is the chance of flipping tails on both these coins?  	A 20%	B 66.7%	C 100%
	D 25%	E 33.3%	F 100%		D 25%	E 60%	F 20%
7 What is the chance of flipping tails on both these coins?  	A 75%	B 33.3%	C 25%	8 What is the chance of flipping tails on both these coins?  	A 10%	B 33.3%	C 25%
	D 50%	E 75%	F 42.9%		D 50%	E 33.3%	F 33.3%