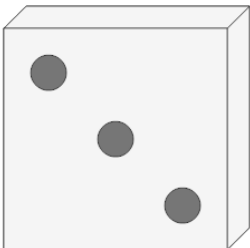
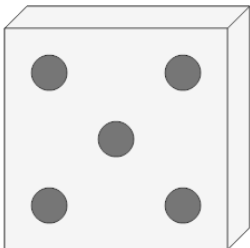
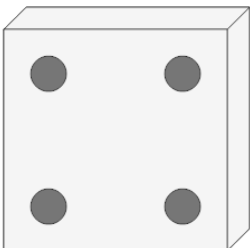
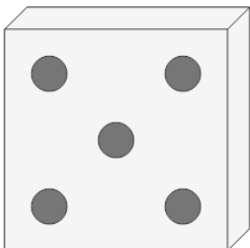
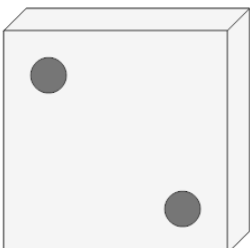
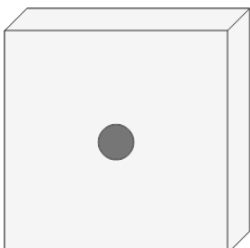
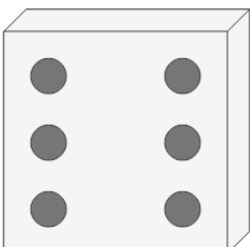
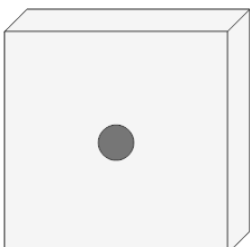




Probability - Dice (1), All Specific, To Fraction

| | | | |
|---|---|--|---|
| 1 What is the chance of rolling 4 on this dice?  | A $\frac{2}{4}$ B $\frac{1}{8}$ C $\frac{2}{15}$ D $\frac{3}{7}$ E $\frac{3}{14}$ F $\frac{1}{6}$ | 2 What is the chance of rolling 6 on this dice?  | A $\frac{2}{5}$ B $\frac{1}{14}$ C $\frac{1}{12}$ D $\frac{3}{3}$ E $\frac{3}{7}$ F $\frac{1}{6}$ |
| 3 What is the chance of rolling 2 on this dice?  | A $\frac{3}{12}$ B $\frac{2}{3}$ C $\frac{3}{11}$ D $\frac{2}{6}$ E $\frac{3}{9}$ F $\frac{1}{6}$ | 4 What is the chance of rolling 3 on this dice?  | A $\frac{1}{15}$ B $\frac{3}{15}$ C $\frac{3}{8}$ D $\frac{1}{12}$ E $\frac{1}{6}$ F $\frac{2}{7}$ |
| 5 What is the chance of rolling 5 on this dice?  | A $\frac{2}{14}$ B $\frac{3}{15}$ C $\frac{1}{9}$ D $\frac{3}{13}$ E $\frac{3}{5}$ F $\frac{1}{6}$ | 6 What is the chance of rolling 4 on this dice?  | A $\frac{2}{8}$ B $\frac{1}{6}$ C $\frac{3}{12}$ D $\frac{1}{9}$ E $\frac{1}{13}$ F $\frac{1}{15}$ |
| 7 What is the chance of rolling 5 on this dice?  | A $\frac{3}{8}$ B $\frac{2}{9}$ C $\frac{1}{14}$ D $\frac{1}{6}$ E $\frac{2}{11}$ F $\frac{3}{6}$ | 8 What is the chance of rolling 1 on this dice?  | A $\frac{3}{8}$ B $\frac{1}{10}$ C $\frac{1}{6}$ D $\frac{3}{3}$ E $\frac{3}{15}$ F $\frac{1}{15}$ |