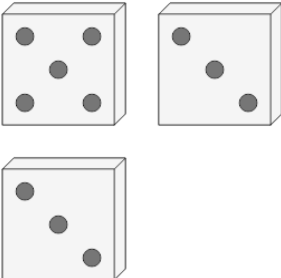


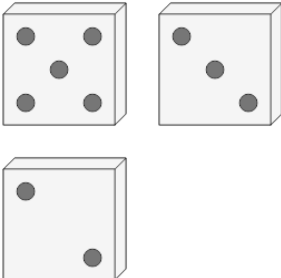
## Probability - Dice (3), Not All Specific, To Fraction

**1** What is the chance of NOT rolling all 2's on these dice?



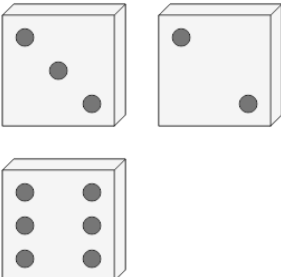
A	B	C
14	403	357
287	68	376
D	E	F
215	259	254
216	256	201

**2** What is the chance of NOT rolling all 3's on these dice?



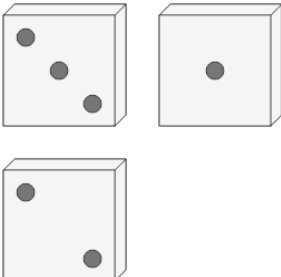
A	B	C
360	144	346
209	339	398
D	E	F
215	302	164
216	433	178

**3** What is the chance of NOT rolling all 6's on these dice?



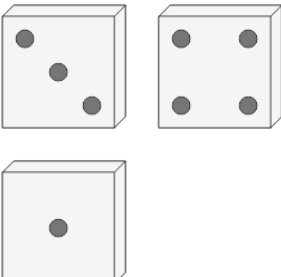
A	B	C
127	215	395
378	216	372
D	E	F
283	177	394
333	258	30

**4** What is the chance of NOT rolling all 4's on these dice?



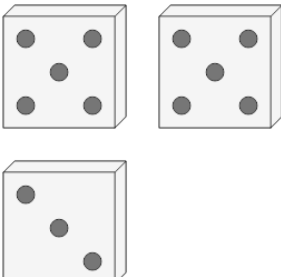
A	B	C
179	257	377
324	290	354
D	E	F
215	235	1
216	269	65

**5** What is the chance of NOT rolling all 4's on these dice?



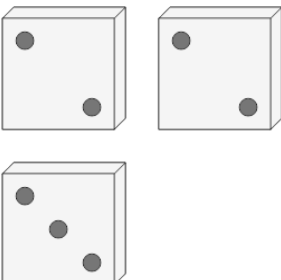
A	B	C
215	418	186
216	255	335
D	E	F
15	365	417
194	40	156

**6** What is the chance of NOT rolling all 4's on these dice?



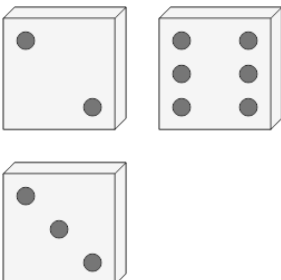
A	B	C
53	158	39
207	237	8
D	E	F
401	33	215
103	173	216

**7** What is the chance of NOT rolling all 6's on these dice?



A	B	C
396	427	215
168	374	216
D	E	F
108	315	81
7	120	31

**8** What is the chance of NOT rolling all 2's on these dice?



A	B	C
413	44	244
106	289	365
D	E	F
317	215	171
268	216	61