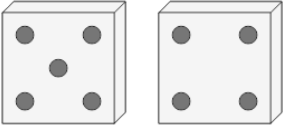
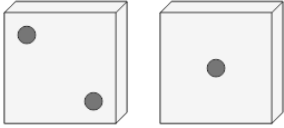
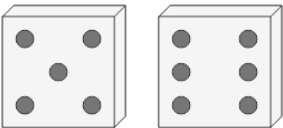
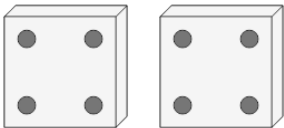
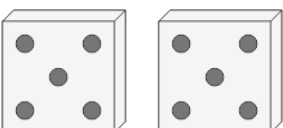
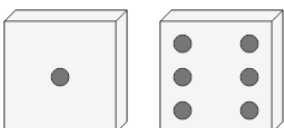
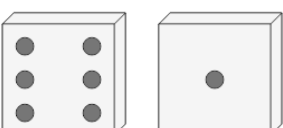
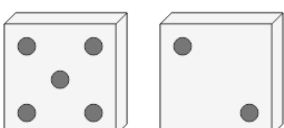




## Probability - Dice (2), All Same, To Fraction

<p><b>1</b> What is the chance of rolling the same number on both these dice?</p> 	<p>A <math>\frac{1}{13}</math></p>	<p>B <math>\frac{1}{6}</math></p>	<p>C <math>\frac{2}{10}</math></p>	<p><b>2</b> What is the chance of rolling the same number on both these dice?</p> 	<p>A <math>\frac{2}{14}</math></p>	<p>B <math>\frac{1}{7}</math></p>	<p>C <math>\frac{1}{6}</math></p>
<p><b>3</b> What is the chance of rolling the same number on both these dice?</p> 	<p>A <math>\frac{2}{3}</math></p>	<p>B <math>\frac{1}{6}</math></p>	<p>C <math>\frac{2}{10}</math></p>	<p><b>4</b> What is the chance of rolling the same number on both these dice?</p> 	<p>A <math>\frac{3}{3}</math></p>	<p>B <math>\frac{1}{10}</math></p>	<p>C <math>\frac{1}{14}</math></p>
<p><b>5</b> What is the chance of rolling the same number on both these dice?</p> 	<p>A <math>\frac{1}{6}</math></p>	<p>B <math>\frac{1}{11}</math></p>	<p>C <math>\frac{3}{9}</math></p>	<p><b>6</b> What is the chance of rolling the same number on both these dice?</p> 	<p>A <math>\frac{1}{6}</math></p>	<p>B <math>\frac{2}{13}</math></p>	<p>C <math>\frac{1}{4}</math></p>
<p><b>7</b> What is the chance of rolling the same number on both these dice?</p> 	<p>A <math>\frac{1}{9}</math></p>	<p>B <math>\frac{2}{8}</math></p>	<p>C <math>\frac{1}{8}</math></p>	<p><b>8</b> What is the chance of rolling the same number on both these dice?</p> 	<p>A <math>\frac{2}{8}</math></p>	<p>B <math>\frac{2}{15}</math></p>	<p>C <math>\frac{3}{10}</math></p>
	<p>D <math>\frac{2}{4}</math></p>	<p>E <math>\frac{3}{13}</math></p>	<p>F <math>\frac{1}{6}</math></p>		<p>D <math>\frac{1}{6}</math></p>	<p>E <math>\frac{1}{4}</math></p>	<p>F <math>\frac{2}{14}</math></p>