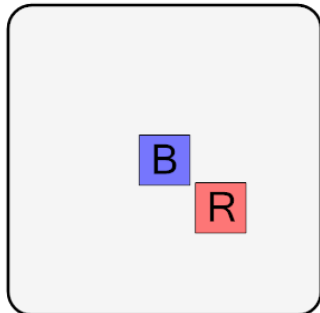




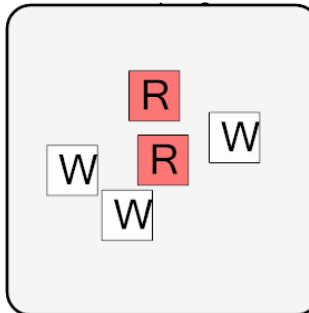
Probability - Shapes, One Set of One Shape, Two Colors - Pick One by Shape and Color, To Decimal

1 What is the chance of drawing a blue square at random from this bag?



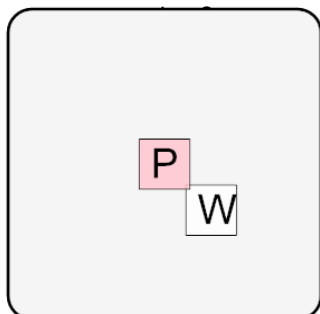
| | | |
|-----|-------|------|
| A | B | C |
| 0.5 | 0.333 | 0.4 |
| D | E | F |
| 0.2 | 0.3 | 0.25 |

2 What is the chance of drawing a white square at random from this



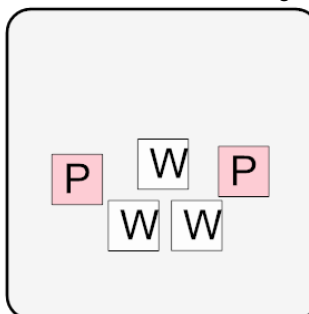
| | | |
|-----|-------|------|
| A | B | C |
| 1 | 0.5 | 0.2 |
| D | E | F |
| 0.6 | 0.333 | 0.75 |

3 What is the chance of drawing a white square at random from this



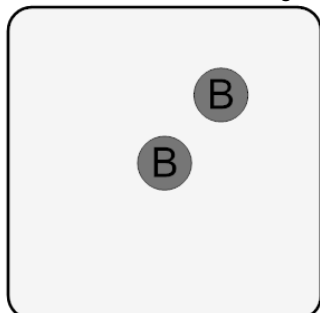
| | | |
|-----|------|------|
| A | B | C |
| 0.1 | 0.5 | 1 |
| D | E | F |
| 0.2 | 0.25 | 0.75 |

4 What is the chance of drawing a pink square at random from this bag?



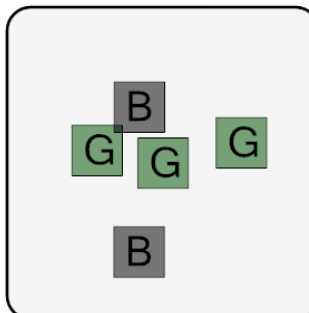
| | | |
|-----|-------|-------|
| A | B | C |
| 1 | 0.667 | 0.4 |
| D | E | F |
| 0.5 | 0.75 | 0.333 |

5 What is the chance of drawing a black circle at random from this bag?



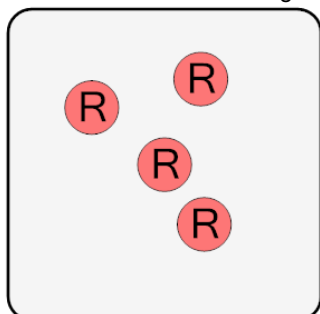
| | | |
|-------|-------|-----|
| A | B | C |
| 1 | 0.5 | 0.2 |
| D | E | F |
| 0.667 | 0.833 | 0.6 |

6 What is the chance of drawing a green square at random from this



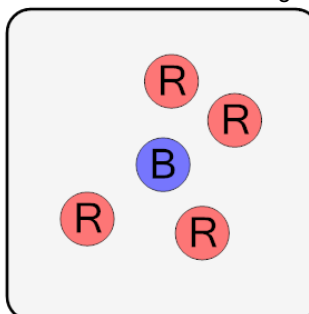
| | | |
|-------|-------|------|
| A | B | C |
| 0.8 | 0.667 | 0.75 |
| D | E | F |
| 0.167 | 0.125 | 0.6 |

7 What is the chance of drawing a red circle at random from this bag?



| | | |
|------|-------|-----|
| A | B | C |
| 0.4 | 0.6 | 1 |
| D | E | F |
| 0.25 | 0.375 | 0.9 |

8 What is the chance of drawing a red circle at random from this bag?



| | | |
|-------|-------|------|
| A | B | C |
| 0.875 | 0.667 | 0.75 |
| D | E | |
| 0.8 | 0.5 | |