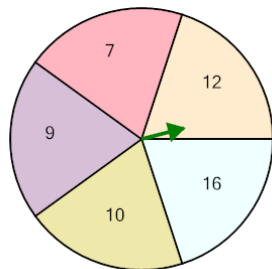


## Probability - Spinner, One Spin, Multiple Answers, To Percent

1

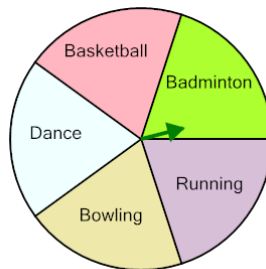


P(prime)

Calculate the probability of spinning a prime number. Show as a percent

A	0%	B	19%
C	25%	D	22%
E	20%	F	13%

2

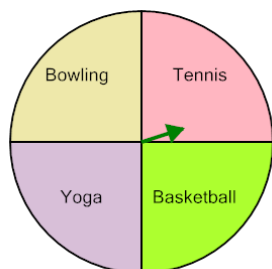


P(racquet sport)

Calculate the probability of spinning a racquet sport. Show as a percent

A	60%	B	50%
C	19%	D	17%
E	20%	F	40%

3




P(racquet sport)

Calculate the probability of spinning a racquet sport. Show as a percent

A	25%	B	26%
C	100%	D	50%
E	20%	F	125%

4

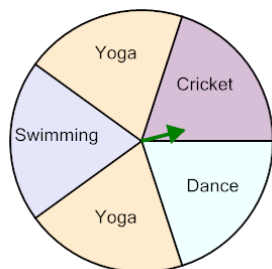


P(racquet sport)

Calculate the probability of spinning a racquet sport. Show as a percent

A	60%	B	40%
C	20%	D	18%
E	19%	F	17%

5

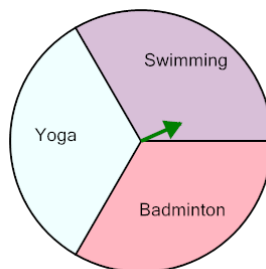


P(ball sport)

Calculate the probability of spinning a ball sport. Show as a percent

A	20%	B	11%
C	80%	D	60%
E	25%	F	16%

6



P(racquet sport)

Calculate the probability of spinning a racquet sport. Show as a percent

A	100%	B	133%
C	39%	D	33%
E	167%	F	67%

7

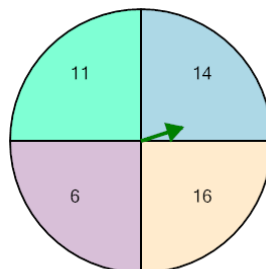


P(racquet sport)

Calculate the probability of spinning a racquet sport. Show as a percent

A	167%	B	67%
C	17%	D	33%
E	39%	F	100%

8



P(odd)

Calculate the probability of spinning an odd number. Show as a percent

A	13%	B	100%
C	50%	D	125%
E	20%	F	25%