



Probability - Spinner, One Spin, Single Answer, To Decimal



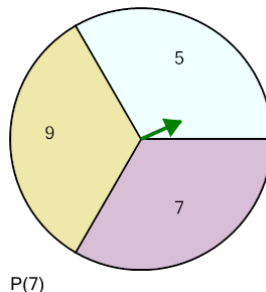
1



Calculate the probability of spinning Red. Show as a decimal

A	0.23	B	1
C	0.8	D	0.4
E	0.22	F	0.2

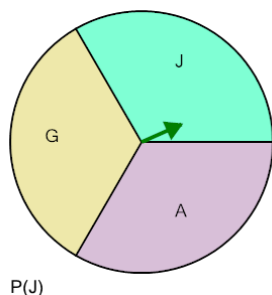
2



Calculate the probability of spinning 7. Show as a decimal

A	0.67	B	0
C	1	D	1.33
E	0.33	F	0.31

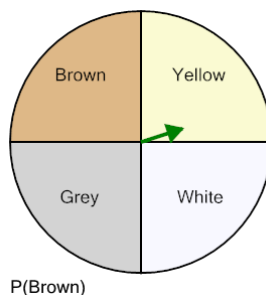
3



Calculate the probability of spinning J. Show as a decimal

A	1.33	B	1
C	0.33	D	0.2
E	0.32	F	0.67

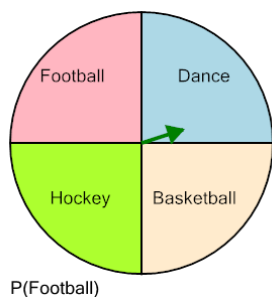
4



Calculate the probability of spinning Brown. Show as a decimal

A	1	B	0.33
C	0.21	D	0.25
E	0	F	0.2

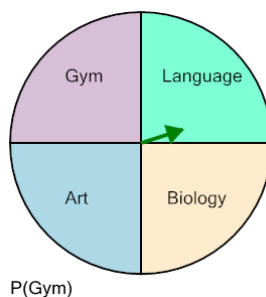
5



Calculate the probability of spinning Football. Show as a decimal

A	1	B	0.23
C	0.25	D	0.24
E	0.13	F	0.5

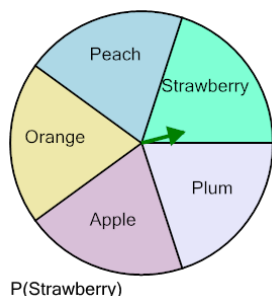
6



Calculate the probability of spinning Gym. Show as a decimal

A	0.13	B	0.14
C	0.23	D	0.22
E	0.25	F	1

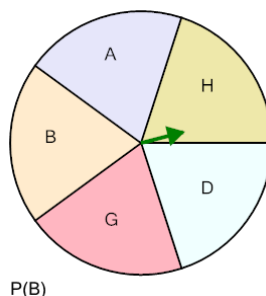
7



Calculate the probability of spinning Strawberry. Show as a decimal

A	0.11	B	0.8
C	0.6	D	0.2
E	0.18	F	1

8



Calculate the probability of spinning B. Show as a decimal

A	0	B	0.5
C	0.33	D	0.4
E	0.8	F	0.2