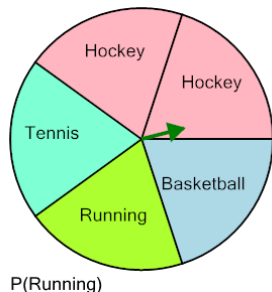




Probability - Spinner, One Spin, Single Answer, To Percent



1

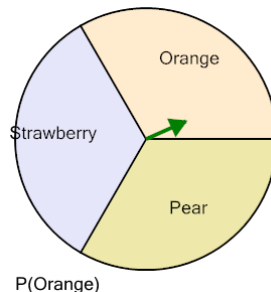


P(Running)

Calculate the probability of spinning Running. Show as a percent

A	40%	B	100%
C	18%	D	20%
E	60%	F	50%

2

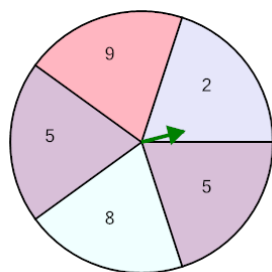


P(Orange)

Calculate the probability of spinning Orange. Show as a percent

A	133%	B	33%
C	32%	D	67%
E	38%	F	100%

3




P(9)

Calculate the probability of spinning 9. Show as a percent

A	80%	B	23%
C	100%	D	16%
E	60%	F	20%

4

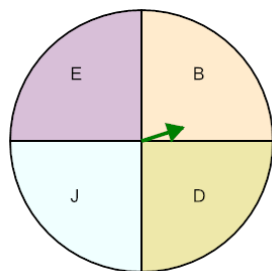


P(Peach)

Calculate the probability of spinning Peach. Show as a percent

A	20%	B	22%
C	60%	D	13%
E	23%	F	80%

5

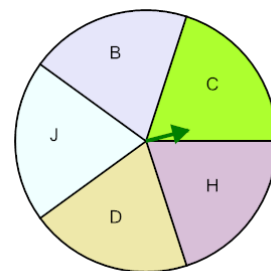


P(B)

Calculate the probability of spinning B. Show as a percent

A	125%	B	29%
C	50%	D	100%
E	25%	F	75%

6

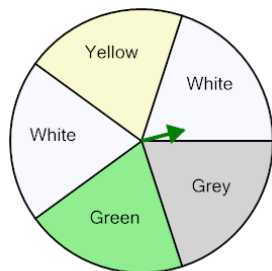


P(B)

Calculate the probability of spinning B. Show as a percent

A	40%	B	100%
C	19%	D	13%
E	17%	F	20%

7

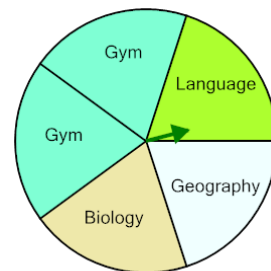


P(Yellow)

Calculate the probability of spinning Yellow. Show as a percent

A	80%	B	14%
C	40%	D	50%
E	20%	F	13%

8



P(Language)

Calculate the probability of spinning Language. Show as a percent

A	11%	B	60%
C	13%	D	100%
E	80%	F	20%