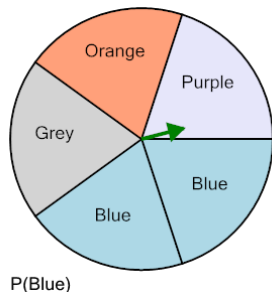




Probability - Spinner, One Spin, Single Answer, To Percent

1

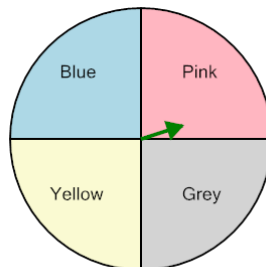


P(Blue)

Calculate the probability of spinning Blue. Show as a percent

A	25%	B	47%
C	20%	D	36%
E	44%	F	40%

2

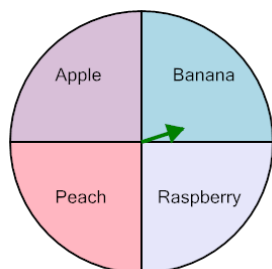


P(Yellow)

Calculate the probability of spinning Yellow. Show as a percent

A	75%	B	25%
C	28%	D	50%
E	125%	F	100%

3

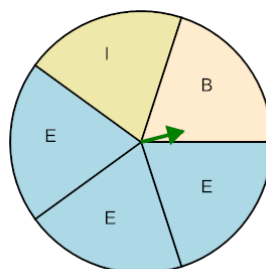


P(Apple)

Calculate the probability of spinning Apple. Show as a percent

A	25%	B	100%
C	75%	D	20%
E	50%	F	125%

4

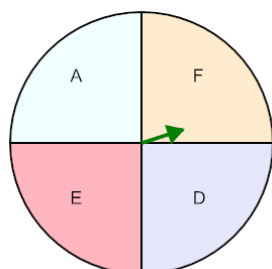


P(E)

Calculate the probability of spinning E. Show as a percent

A	50%	B	80%
C	64%	D	60%
E	100%	F	40%

5

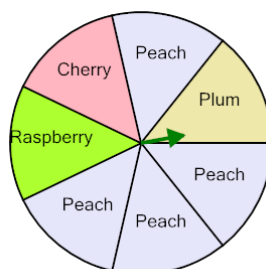


P(E)

Calculate the probability of spinning E. Show as a percent

A	27%	B	50%
C	75%	D	17%
E	25%	F	100%

6

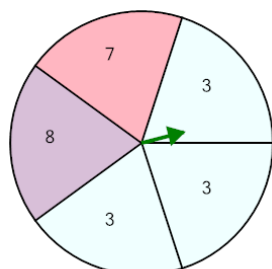


P(Peach)

Calculate the probability of spinning Peach. Show as a percent

A	43%	B	57%
C	114%	D	86%
E	100%	F	52%

7

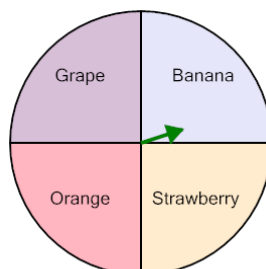


P(3)

Calculate the probability of spinning 3. Show as a percent

A	60%	B	40%
C	61%	D	51%
E	80%	F	0%

8



P(Banana)

Calculate the probability of spinning Banana. Show as a percent

A	50%	B	100%
C	25%	D	75%
E	33%	F	26%