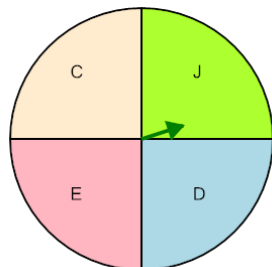




## Probability - Spinner, Two Spins, Both Answers, To Percent

1

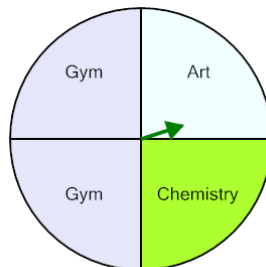


P(D twice)

Calculate the probability of spinning D twice in a row. Show as a percent

A	6%	B	5%
C	19%	D	7%
E	25%	F	8%

2

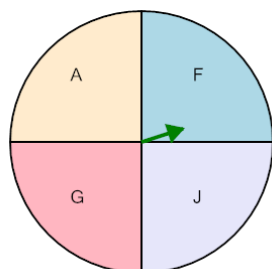


P(Chemistry twice)

Calculate the probability of spinning Chemistry twice in a row. Show as a percent

A	5%	B	13%
C	0%	D	6%
E	31%	F	8%

3

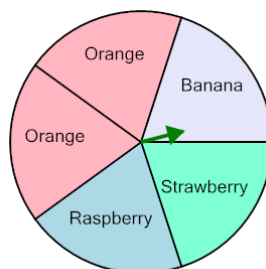


P(F twice)

Calculate the probability of spinning F twice in a row. Show as a percent

A	7%	B	6%
C	5%	D	13%
E	19%	F	9%

4

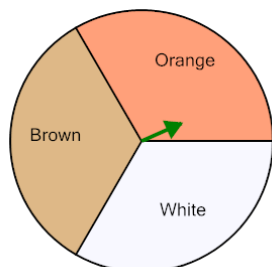


P(Strawberry twice)

Calculate the probability of spinning Strawberry twice in a row. Show as a percent

A	5%	B	3%
C	20%	D	12%
E	16%	F	4%

5

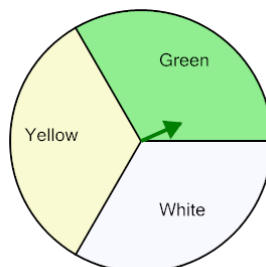


P(Orange twice)

Calculate the probability of spinning Orange twice in a row. Show as a percent

A	33%	B	0%
C	13%	D	22%
E	44%	F	11%

6

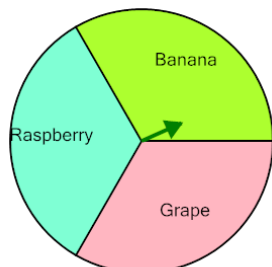


P(Yellow twice)

Calculate the probability of spinning Yellow twice in a row. Show as a percent

A	13%	B	25%
C	12%	D	10%
E	22%	F	11%

7

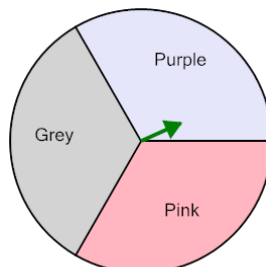


P(Grape twice)

Calculate the probability of spinning Grape twice in a row. Show as a percent

A	8%	B	44%
C	0%	D	33%
E	11%	F	12%

8



P(Grey twice)

Calculate the probability of spinning Grey twice in a row. Show as a percent

A	25%	B	11%
C	17%	D	44%
E	33%	F	12%