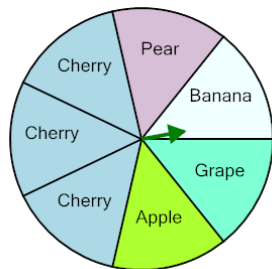




Probability - Spinner, Two Spins, Both Answers, To Percent

1

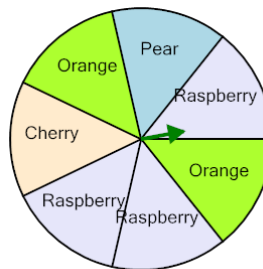


P(Pear twice)

Calculate the probability of spinning Pear twice in a row. Show as a percent

A	6%	B	2%
C	4%	D	10%
E	8%	F	0%

2

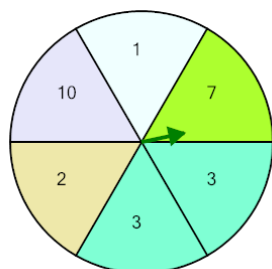


P(Orange twice)

Calculate the probability of spinning Orange twice in a row. Show as a percent

A	0%	B	4%
C	400%	D	8%
E	7%	F	10%

3

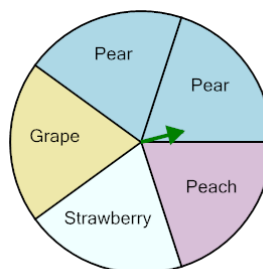


P(3 twice)

Calculate the probability of spinning 3 twice in a row. Show as a percent

A	12%	B	11%
C	13%	D	6%
E	3%	F	8%

4

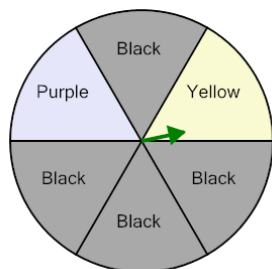


P(Pear twice)

Calculate the probability of spinning Pear twice in a row. Show as a percent

A	20%	B	15%
C	17%	D	32%
E	19%	F	16%

5

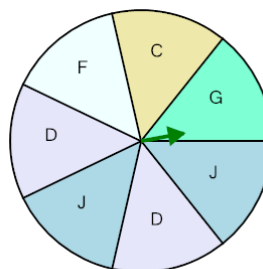


P(Black twice)

Calculate the probability of spinning Black twice in a row. Show as a percent

A	36%	B	42%
C	47%	D	43%
E	52%	F	44%

6

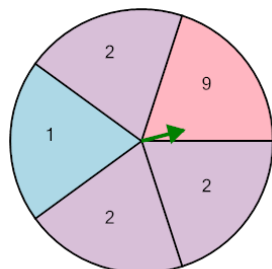


P(J twice)

Calculate the probability of spinning J twice in a row. Show as a percent

A	9%	B	0%
C	14%	D	4%
E	12%	F	8%

7

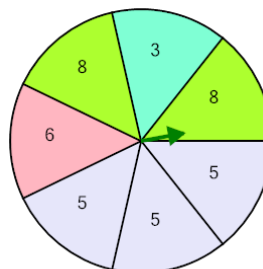


P(2 twice)

Calculate the probability of spinning 2 twice in a row. Show as a percent

A	36%	B	32%
C	39%	D	40%
E	20%	F	34%

8



P(5 twice)

Calculate the probability of spinning 5 twice in a row. Show as a percent

A	18%	B	27%
C	19%	D	16%
E	24%	F	22%