

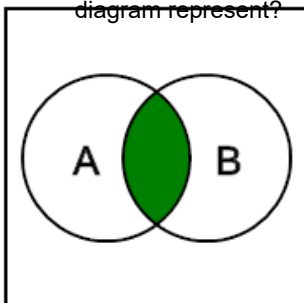


Probability Union, Intersection, Complement - Venn Diagram to Name



1

What probability set operation does the green area in this Venn diagram represent?



A
Complement of A

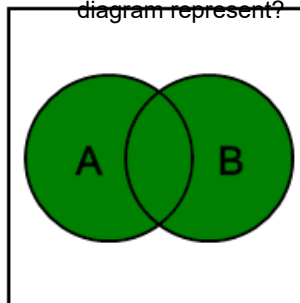
B
A union B

C
A conditional on B

D
A intersect B

2

What probability set operation does the green area in this Venn diagram represent?



A
A conditional on B

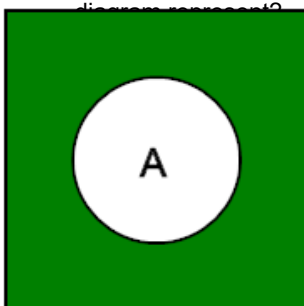
B
A union B

C
Complement of A

D
A intersect B

3

What probability set operation does the green area in this Venn diagram represent?



A
Complement of A

B
A conditional on B

C
A union B

D
A intersect B