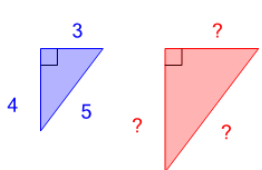
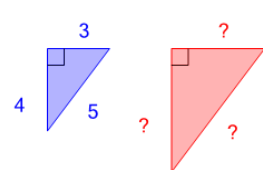
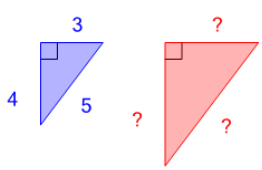


Pythagorean Triples - Example to Set of Side Lengths (Scaled)

1 Find another set of integer side lengths for a right triangle  (not to scale)	A	B	2 Find another set of integer side lengths for a right triangle  (not to scale)	A	B
	6, 13, 15	1, 1, 6		11, 16, 19	12, 16, 20
	C	D		C	D
6, 15, 17	1, 13, 14	9, 20, 21	5, 15, 19		
E	F	E	F		
9, 12, 15	8, 11, 17	10, 11, 19	1, 2, 4		
3 Find another set of integer side lengths for a right triangle  (not to scale)	A	B			
	4, 7, 8	0, 3, 7			
	C	D			
8, 8, 13	10, 10, 14				
E	F				
6, 8, 10	6, 7, 8				