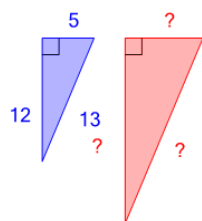




Pythagorean Triples - Example to Set of Side Lengths (Scaled)

1

Find another set of integer side lengths for a right triangle



(not to scale)

A

25, 59, 62

B

28, 56, 68

C

20, 58, 61

D

23, 57, 58

E

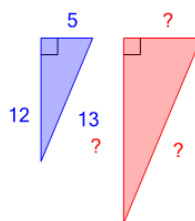
26, 55, 65

F

25, 60, 65

2

Find another set of integer side lengths for a right triangle



(not to scale)

A

10, 24, 26

B

12, 20, 26

C

13, 23, 25

D

6, 20, 28

E

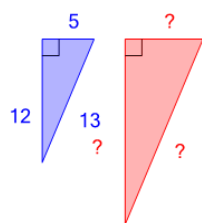
5, 29, 33

F

2, 23, 25

3

Find another set of integer side lengths for a right triangle



(not to scale)

A

20, 48, 52

B

20, 50, 55

C

24, 50, 52

D

18, 45, 47

E

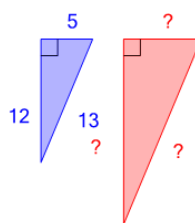
23, 50, 56

F

15, 49, 55

4

Find another set of integer side lengths for a right triangle



(not to scale)

A

15, 36, 40

B

15, 36, 39

C

12, 33, 34

D

16, 39, 42

E

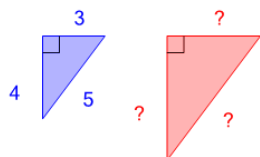
7, 13, 14

F

13, 32, 43

5

Find another set of integer side lengths for a right triangle



(not to scale)

A

15, 20, 25

B

19, 19, 22

C

17, 19, 22

D

8, 25, 27

E

1, 1, 3

F

17, 19, 27