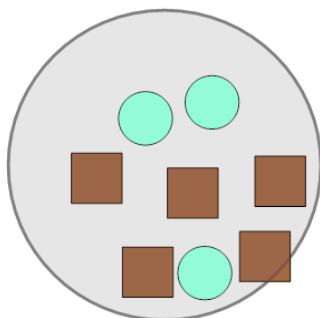


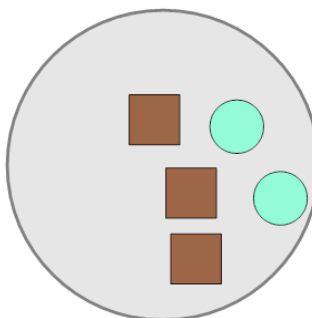
Ratios - Calculate Item Ratio from Values (From Image)

1 What is the (simplest) ratio of circles to squares?



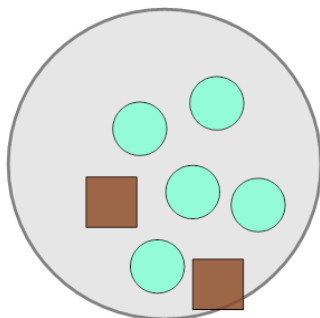
A	7:13	B	7:4	C	3:5
D	4:9				

2 What is the (simplest) ratio of circles to squares?



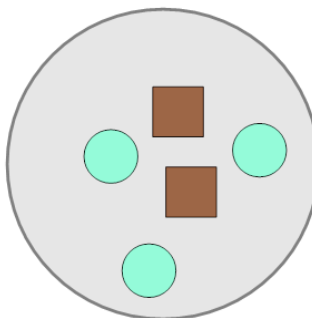
A	2:3	B	1:1	C	7:5
D	8:12				

3 What is the (simplest) ratio of circles to squares?



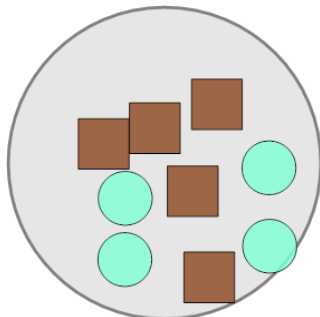
A	5:2	B	4:7	C	7:1
D	1:7				

4 What is the (simplest) ratio of circles to squares?



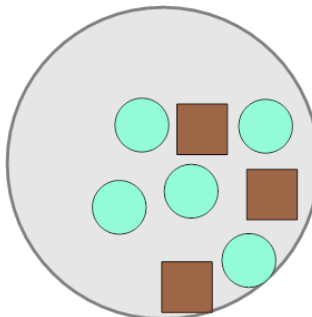
A	9:3	B	6:4	C	7:11
D	3:2				

5 What is the (simplest) ratio of circles to squares?



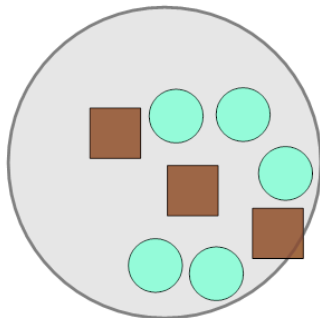
A	7:3	B	4:5	C	9:9
D	13:3				

6 What is the (simplest) ratio of circles to squares?



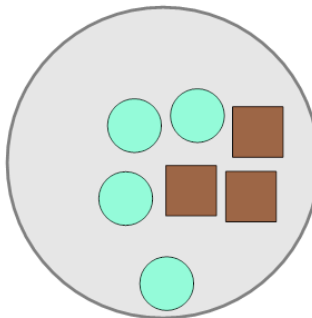
A	2:10	B	5:3	C	3:5
D	8:11				

7 What is the (simplest) ratio of circles to squares?



A	14:2	B	1:4	C	2:8
D	5:3				

8 What is the (simplest) ratio of circles to squares?



A	3:6	B	5:11	C	4:3
D	6:1				