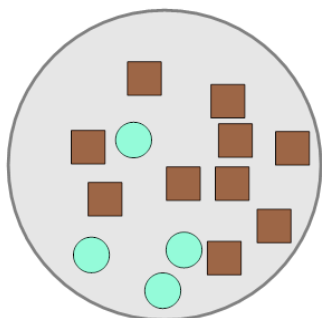


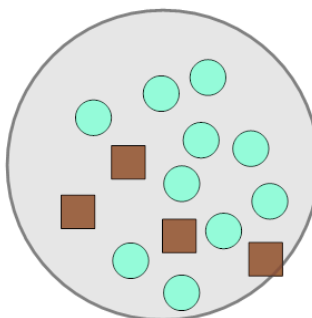
Ratios - Calculate Item Ratio from Values (From Image)

1 What is the (simplest) ratio of circles to squares?



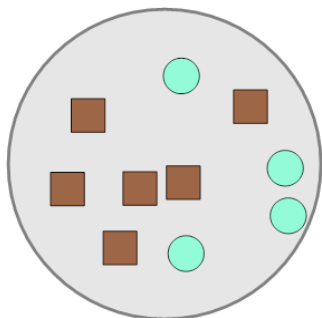
A	7:7	B	2:5	C	5:3
D	3:4				

2 What is the (simplest) ratio of circles to squares?



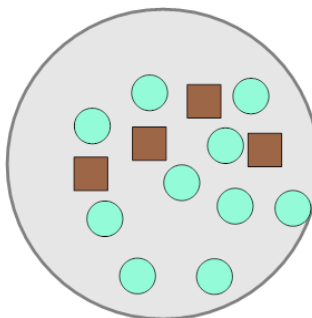
A	5:2	B	3:7	C	8:1
D	13:10				

3 What is the (simplest) ratio of circles to squares?



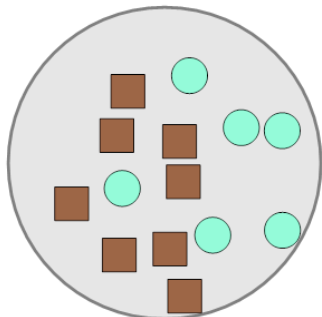
A	3:1	B	8:2	C	2:3
D	8:9				

4 What is the (simplest) ratio of circles to squares?



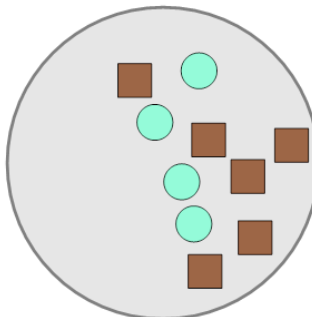
A	10:9	B	5:2	C	2:3
D	9:5				

5 What is the (simplest) ratio of circles to squares?



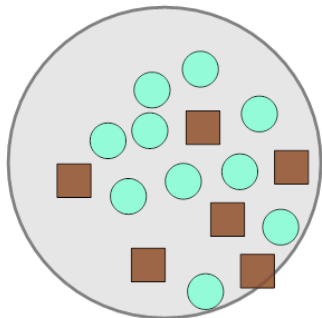
A	3:4	B	2:1	C	4:5
D	9:7				

6 What is the (simplest) ratio of circles to squares?



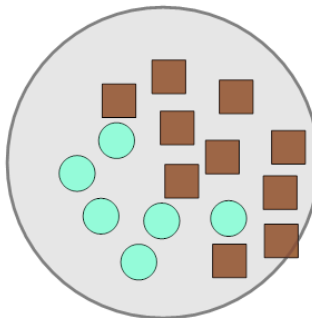
A	5:2	B	2:3	C	3:7
D	1:2				

7 What is the (simplest) ratio of circles to squares?



A	13:1	B	12:8	C	5:3
D	1:2				

8 What is the (simplest) ratio of circles to squares?



A	3:5	B	9:3	C	5:2
D	7:2				