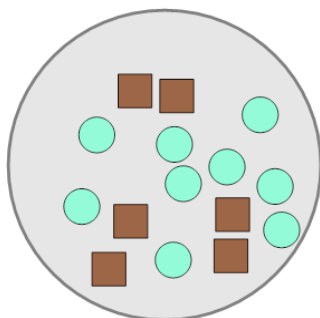


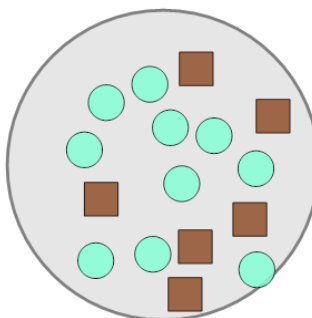
Ratios - Calculate Total Ratio from Values (From Image)

1 What is the (simplest) ratio of circles to ALL shapes?



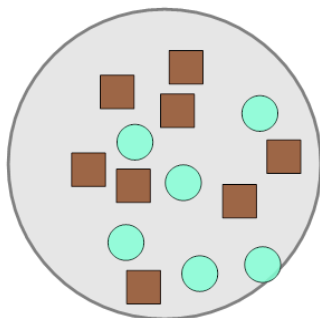
A	3:5	B	11:8	C	1:13
D	6:2				

2 What is the (simplest) ratio of squares to ALL shapes?



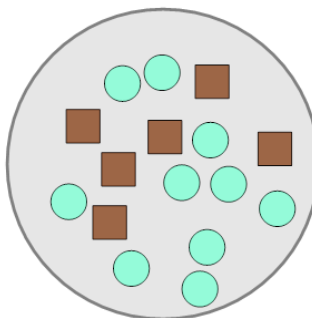
A	3:8	B	12:12	C	11:2
D	8:7				

3 What is the (simplest) ratio of circles to ALL shapes?



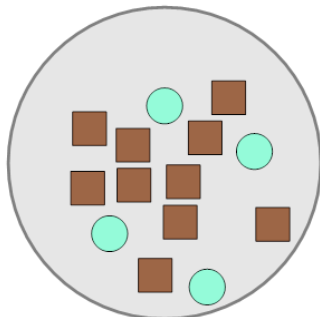
A	10:11	B	3:7	C	4:10
D	11:3				

4 What is the (simplest) ratio of circles to ALL shapes?



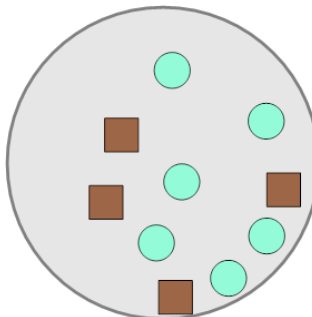
A	5:8	B	2:2	C	8:9
D	4:17				

5 What is the (simplest) ratio of squares to ALL shapes?



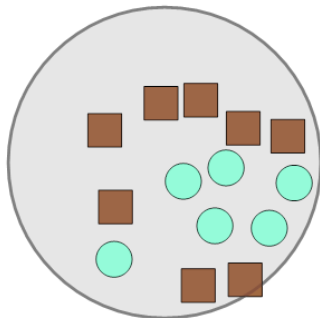
A	11:5	B	6:3	C	10:5
D	5:7				

6 What is the (simplest) ratio of squares to ALL shapes?



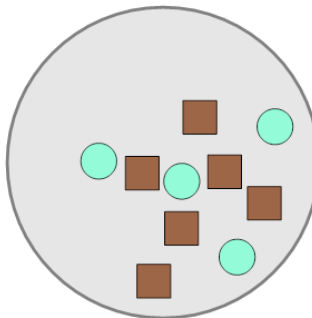
A	8:2	B	2:5	C	9:3
D	5:13				

7 What is the (simplest) ratio of squares to ALL shapes?



A	13:9	B	1:1	C	6:12
D	4:7				

8 What is the (simplest) ratio of circles to ALL shapes?



A	8:6	B	6:13	C	2:5
D	1:3				